



# Place d'Aiguilles sur Une Horloge Analogique (E)


Nom: \_\_\_\_\_


Date: \_\_\_\_\_


Placer les aiguilles de l'horloge pour qu'elles montrent le temps indiqué.


1.   
Midi Minuit  
8:21:00 PM


2.   
Midi Minuit  
6:43:30 PM


3.   
Minuit Midi  
2:35:00 AM


4.   
Midi Minuit  
3:51:00 PM


5.   
Minuit Midi  
5:31:30 AM


6.   
Minuit Midi  
6:22:00 AM


7.   
Minuit Midi  
10:54:30 AM

8.   
Midi Minuit  
11:21:30 PM

9.   
Midi Minuit  
1:13:00 PM

10.   
Minuit Midi  
1:53:30 AM

11.   
Minuit Midi  
9:09:00 AM

12.   
Midi Minuit  
5:42:30 PM

# Place d'Aiguilles sur Une Horloge Analogique (E) Solutions

Nom: \_\_\_\_\_

Date: \_\_\_\_\_

Placer les aiguilles de l'horloge pour qu'elles montrent le temps indiqué.

