



Place d'Aiguilles sur Une Horloge Analogique (H)


Nom: _____


Date: _____


Placer les aiguilles de l'horloge pour qu'elles montrent le temps indiqué.


1. 
Midi 11:49:15 PM Minuit


2. 
Minuit 5:08:00 AM Midi


3. 
Midi 12:10:45 PM Minuit


4. 
Midi 2:09:35 PM Minuit


5. 
Minuit 2:08:20 AM Midi


6. 
Midi 6:06:55 PM Minuit


7. 
Midi 4:03:30 PM Minuit

8. 
Minuit 1:30:10 AM Midi

9. 
Midi 8:27:05 PM Minuit

10. 
Minuit 10:23:50 AM Midi

11. 
Minuit 9:50:25 AM Midi

12. 
Minuit 6:50:40 AM Midi

Place d'Aiguilles sur Une Horloge Analogique (H) Solutions

Nom: _____

Date: _____

Placer les aiguilles de l'horloge pour qu'elles montrent le temps indiqué.

