



# Place d'Aiguilles sur Une Horloge Analogique (B)


Nom: \_\_\_\_\_


Date: \_\_\_\_\_


Placer les aiguilles de l'horloge pour qu'elles montrent le temps indiqué.


1.   
Midi Minuit  
1:02:20 PM


2.   
Midi Minuit  
7:39:45 PM


3.   
Minuit Midi  
5:31:40 AM


4.   
Minuit Midi  
9:37:55 AM


5.   
Minuit Midi  
2:09:50 AM

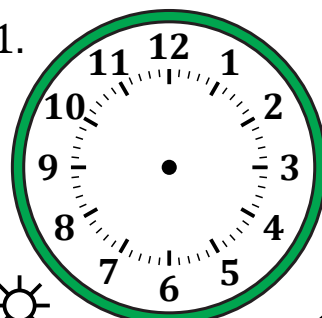
6.   
Midi Minuit  
10:49:00 PM


7.   
Minuit Midi  
7:00:10 AM

8.   
Midi Minuit  
2:35:05 PM

9.   
Midi Minuit  
5:15:30 PM

10.   
Minuit Midi  
12:30:35 AM

11.   
Midi Minuit  
9:56:15 PM

12.   
Minuit Midi  
11:09:25 AM

# Place d'Aiguilles sur Une Horloge Analogique (B) Solutions

Nom: \_\_\_\_\_

Date: \_\_\_\_\_

Placer les aiguilles de l'horloge pour qu'elles montrent le temps indiqué.

