



Place d'Aiguilles sur Une Horloge Analogique (E)


Nom: _____


Date: _____


Placer les aiguilles de l'horloge pour qu'elles montrent le temps indiqué.


1. 
Midi Minuit
14h19m56s


2. 
Minuit Midi
02h25m54s


3. 
Minuit Midi
09h56m13s


4. 
Minuit Midi
06h41m36s


5. 
Midi Minuit
16h54m35s


6. 
Minuit Midi
05h40m33s


7. 
Midi Minuit
12h19m54s

8. 
Midi Minuit
18h58m29s

9. 
Minuit Midi
11h23m46s

10. 
Midi Minuit
21h07m20s

11. 
Minuit Midi
00h19m00s


12. 
Midi Minuit
22h48m31s


Place d'Aiguilles sur Une Horloge Analogique (E) Solutions


Nom: _____


Date: _____


Placer les aiguilles de l'horloge pour qu'elles montrent le temps indiqué.


1. 
Midi Minuit
14h19m56s


2. 
Minuit Midi
02h25m54s


3. 
Minuit Midi
09h56m13s


4. 
Minuit Midi
06h41m36s


5. 
Midi Minuit
16h54m35s


6. 
Minuit Midi
05h40m33s


7. 
Midi Minuit
12h19m54s

8. 
Midi Minuit
18h58m29s

9. 
Minuit Midi
11h23m46s

10. 
Midi Minuit
21h07m20s

11. 
Minuit Midi
00h19m00s

12. 
Midi Minuit
22h48m31s