



Place d'Aiguilles sur Une Horloge Analogique (C)


Nom: _____


Date: _____


Placer les aiguilles de l'horloge pour qu'elles montrent le temps indiqué.


1. 
Midi Minuit
20h50m58s


2. 
Minuit Midi
09h15m54s


3. 
Minuit Midi
02h23m11s


4. 
Midi Minuit
18h14m48s


5. 
Minuit Midi
05h14m36s


6. 
Midi Minuit
16h29m41s


7. 
Minuit Midi
06h14m02s

8. 
Minuit Midi
00h11m22s

9. 
Midi Minuit
12h36m07s

10. 
Midi Minuit
15h36m08s

11. 
Midi Minuit
23h47m07s

12. 
Minuit Midi
10h28m08s