



Place d'Aiguilles sur Une Horloge Analogique (C)


Nom: _____


Date: _____


Placer les aiguilles de l'horloge pour qu'elles montrent le temps indiqué.


1. 
Midi Minuit
11:30 PM


2. 
Minuit Midi
7:30 AM


3. 
Midi Minuit
6:00 PM


4. 
Midi Minuit
8:00 PM


5. 
Midi Minuit
1:30 PM


6. 
Minuit Midi
12:30 AM


7. 
Minuit Midi
4:00 AM

8. 
Midi Minuit
3:00 PM

9. 
Minuit Midi
8:00 AM

10. 
Minuit Midi
2:00 AM

11. 
Minuit Midi
11:30 AM

12. 
Midi Minuit
5:30 PM