


Lecture d'une Horloge Analogique (J)

Nom: _____

Date: _____

Lisez chaque heure et écrivez-la dans l'espace sous l'horloge.


1.



Minuit

Midi


2.



Minuit

Midi


3.



Midi

Minuit


4.



Minuit

Midi


5.



Minuit

Midi


6.



Midi

Minuit


7.



Minuit

Midi


8.



Midi

Minuit


9.



Midi

Minuit


10.



Midi

Minuit


11.



Minuit

Midi

12.



Midi

Minuit

Lecture d'une Horloge Analogique (J) Solutions

Nom: _____

Date: _____

Lisez chaque heure et écrivez-la dans l'espace sous l'horloge.

