


Lecture d'une Horloge Analogique (E)

Nom: _____

Date: _____

Lisez chaque heure et écrivez-la dans l'espace sous l'horloge.

1.




Minuit



Midi

2.




Midi



Minuit

3.



Midi




Minuit

4.



Minuit



Midi
