


# Lecture d'une Horloge Analogique (G)

Nom: \_\_\_\_\_

Date: \_\_\_\_\_


Lisez chaque heure et écrivez-la dans l'espace sous l'horloge.

1.




\_\_\_\_\_

2.




\_\_\_\_\_

3.




\_\_\_\_\_

4.




\_\_\_\_\_

5.




\_\_\_\_\_

6.




\_\_\_\_\_

7.




\_\_\_\_\_

8.




\_\_\_\_\_

9.




\_\_\_\_\_

10.




\_\_\_\_\_

11.



\_\_\_\_\_

12.



\_\_\_\_\_

# Lecture d'une Horloge Analogique (G) Solutions

Nom: \_\_\_\_\_

Date: \_\_\_\_\_

Lisez chaque heure et écrivez-la dans l'espace sous l'horloge.

