


# Lecture d'une Horloge Analogique (B)

Nom: \_\_\_\_\_

Date: \_\_\_\_\_

Lisez chaque heure et écrivez-la dans l'espace sous l'horloge.

1.




Minuit

Midi

\_\_\_\_\_

2.




Midi

Minuit

\_\_\_\_\_

3.




Minuit

Midi

\_\_\_\_\_

4.




Midi

Minuit

\_\_\_\_\_

5.




Midi

Minuit

\_\_\_\_\_

6.




Midi

Minuit

\_\_\_\_\_

7.



Midi

Minuit

\_\_\_\_\_

8.




Minuit

Midi

\_\_\_\_\_

9.




Midi

Minuit

\_\_\_\_\_

10.




Minuit

Midi

\_\_\_\_\_

11.




Minuit

Midi

\_\_\_\_\_

12.



Minuit

Midi

\_\_\_\_\_