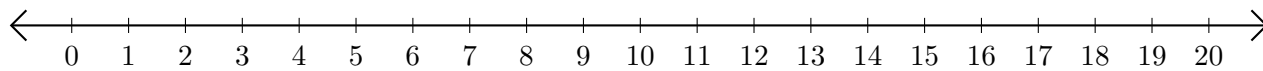


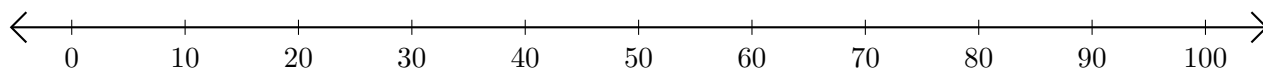
Soustraction de Nombres - Droite Graduée (J)

Utilisez la droite graduée pour calculer chaque différence.

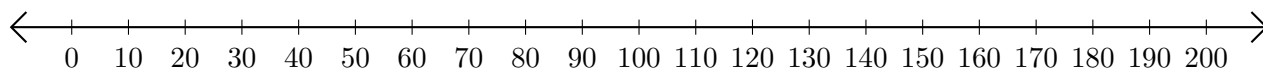
1. $20 - 18 = \underline{\quad}$



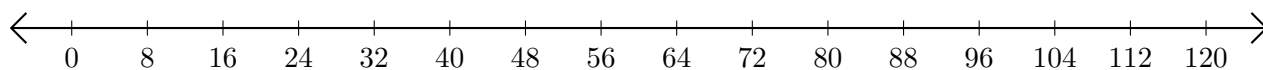
2. $100 - 80 = \underline{\quad}$



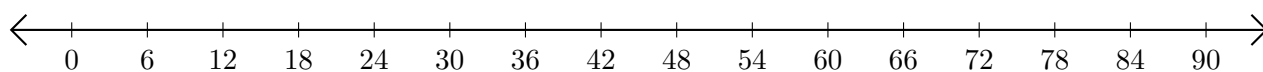
3. $160 - 130 = \underline{\quad}$



4. $72 - 64 = \underline{\quad}$



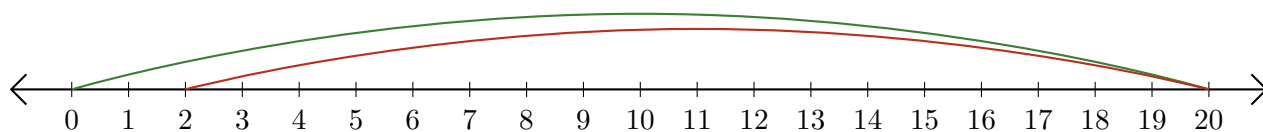
5. $48 - 36 = \underline{\quad}$



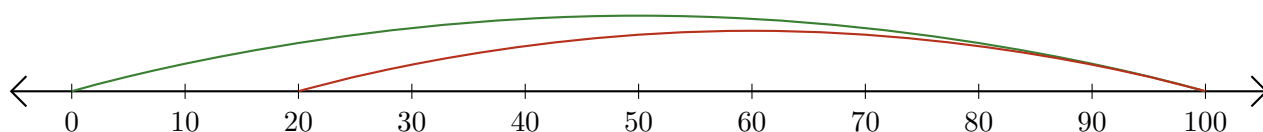
Soustraction de Nombres - Droite Graduée (J) Réponses

Utilisez la droite graduée pour calculer chaque différence.

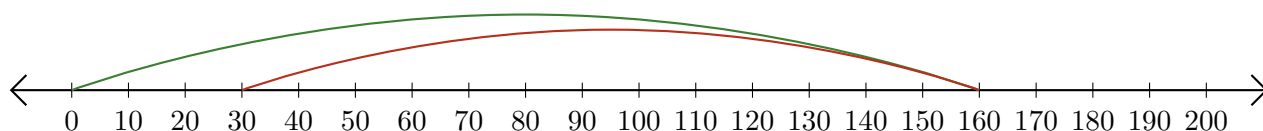
1. $20 - 18 = \underline{2}$



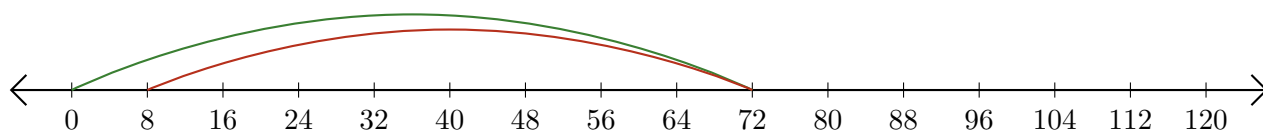
2. $100 - 80 = \underline{20}$



3. $160 - 130 = \underline{30}$



4. $72 - 64 = \underline{8}$



5. $48 - 36 = \underline{12}$

