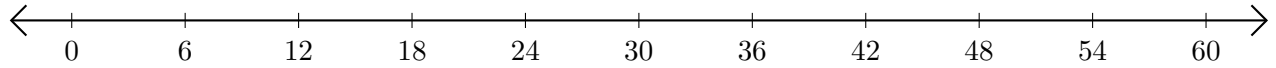


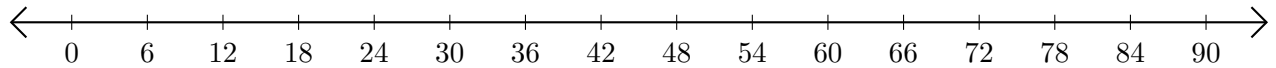
Soustraction de Nombres - Droite Graduée (G)

Utilisez la droite graduée pour calculer chaque différence.

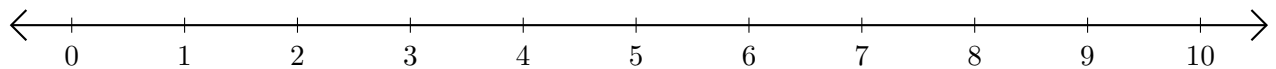
1. $42 - 18 = \underline{\quad}$



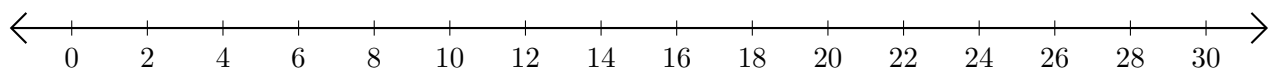
2. $60 - 36 = \underline{\quad}$



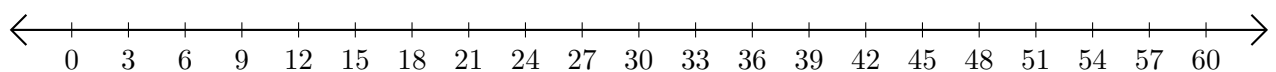
3. $5 - 4 = \underline{\quad}$



4. $22 - 8 = \underline{\quad}$



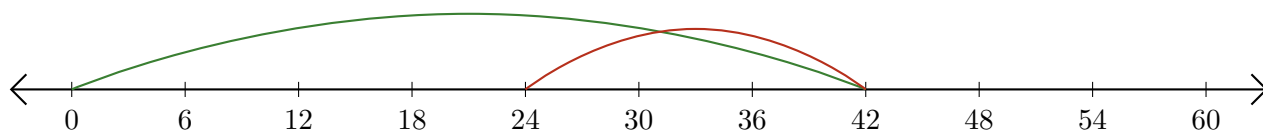
5. $51 - 12 = \underline{\quad}$



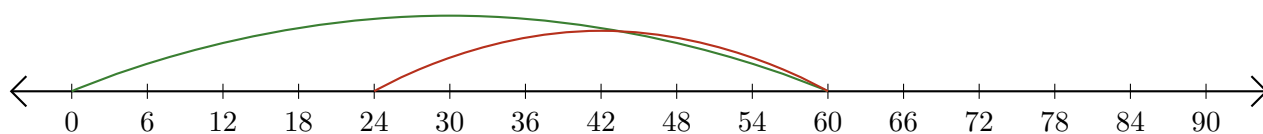
Soustraction de Nombres - Droite Graduée (G) Réponses

Utilisez la droite graduée pour calculer chaque différence.

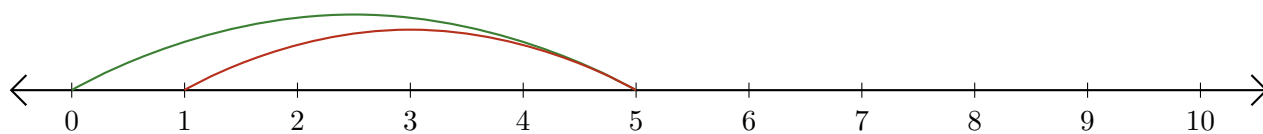
1. $42 - 18 = \underline{24}$



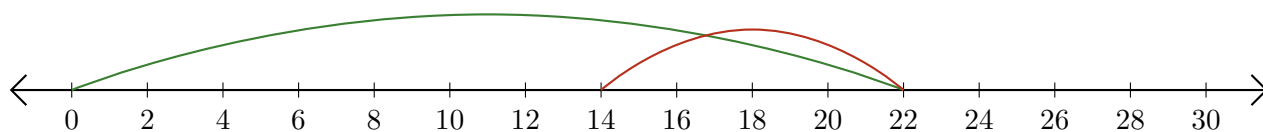
2. $60 - 36 = \underline{24}$



3. $5 - 4 = \underline{1}$



4. $22 - 8 = \underline{14}$



5. $51 - 12 = \underline{39}$

