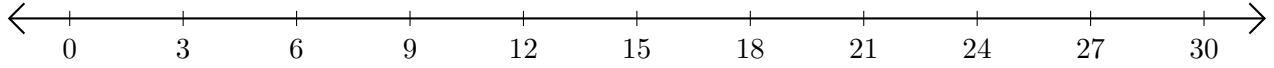


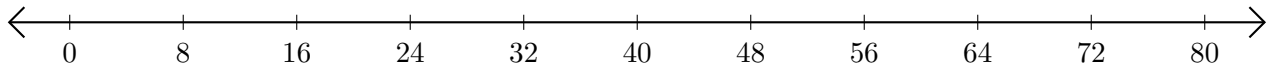
Soustraction de Nombres - Droite Graduée (F)

Utilisez la droite graduée pour calculer chaque différence.

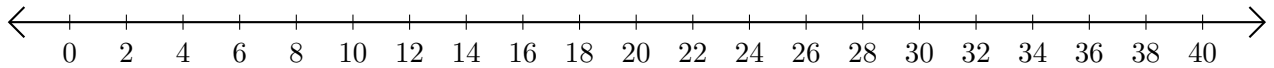
1. $24 - 15 = \underline{\quad}$



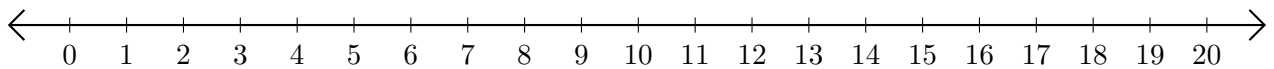
2. $72 - 64 = \underline{\quad}$



3. $40 - 34 = \underline{\quad}$



4. $15 - 12 = \underline{\quad}$



5. $90 - 75 = \underline{\quad}$

