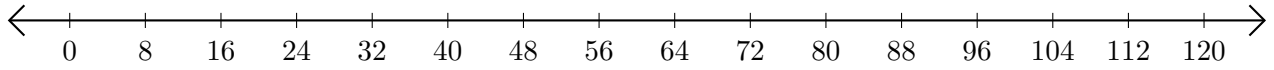


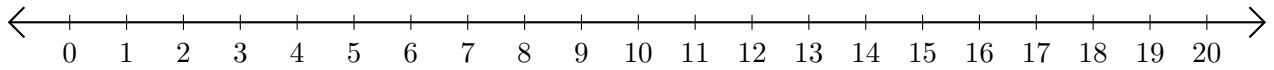
Soustraction de Nombres - Droite Graduée (D)

Utilisez la droite graduée pour calculer chaque différence.

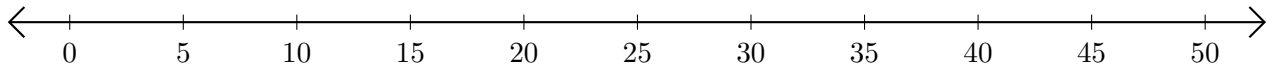
1. $96 - 56 = \underline{\quad}$



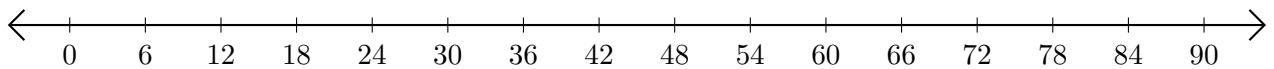
2. $16 - 7 = \underline{\quad}$



3. $50 - 40 = \underline{\quad}$



4. $90 - 84 = \underline{\quad}$



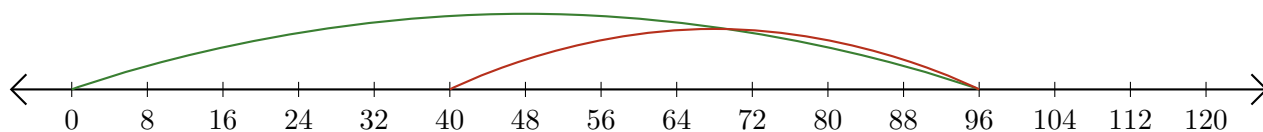
5. $100 - 60 = \underline{\quad}$



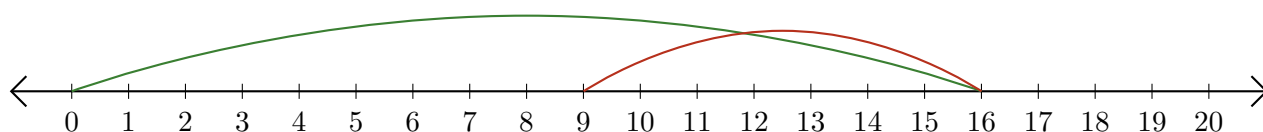
Soustraction de Nombres - Droite Graduée (D) Réponses

Utilisez la droite graduée pour calculer chaque différence.

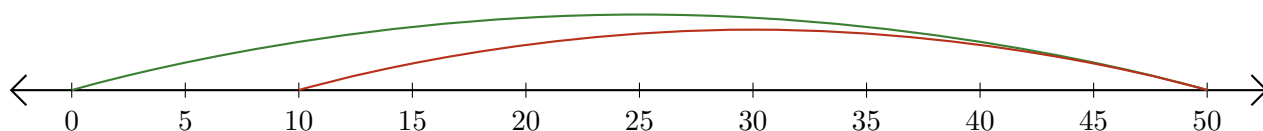
1. $96 - 56 = \underline{40}$



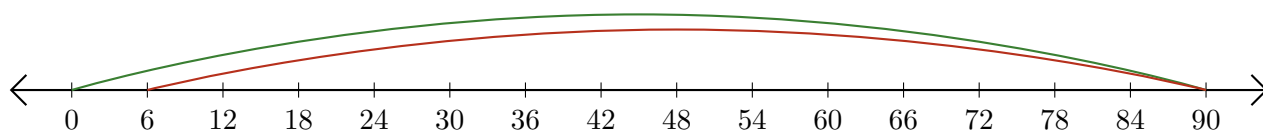
2. $16 - 7 = \underline{9}$



3. $50 - 40 = \underline{10}$



4. $90 - 84 = \underline{6}$



5. $100 - 60 = \underline{40}$

