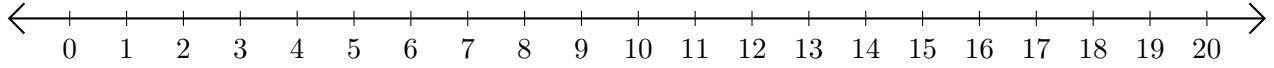


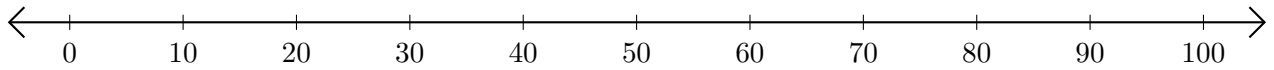
## Soustraction de Nombres - Droite Graduée (B)

Utilisez la droite graduée pour calculer chaque différence.

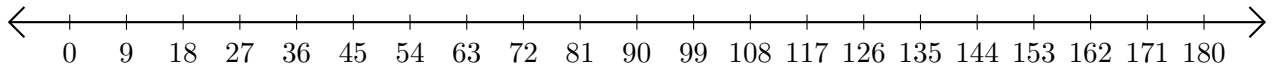
1.  $16 - 14 = \underline{\quad}$



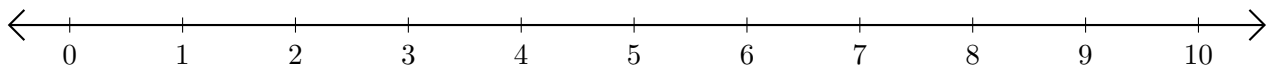
2.  $70 - 50 = \underline{\quad}$



3.  $171 - 63 = \underline{\quad}$



4.  $8 - 6 = \underline{\quad}$



5.  $30 - 24 = \underline{\quad}$

