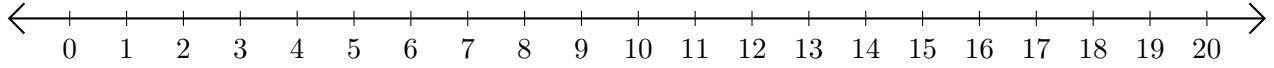


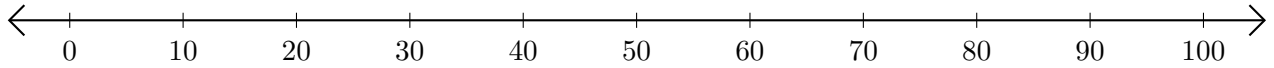
Soustraction de Nombres - Droite Graduée (B)

Utilisez la droite graduée pour calculer chaque différence.

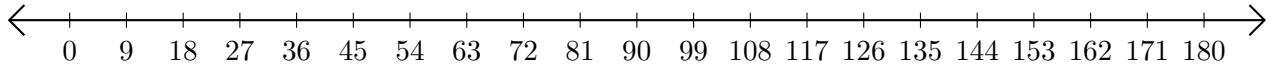
1. $16 - 14 = \underline{\quad}$



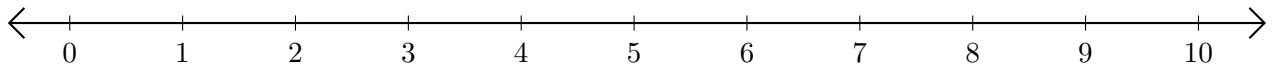
2. $70 - 50 = \underline{\quad}$



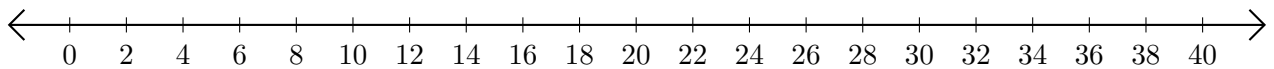
3. $171 - 63 = \underline{\quad}$



4. $8 - 6 = \underline{\quad}$



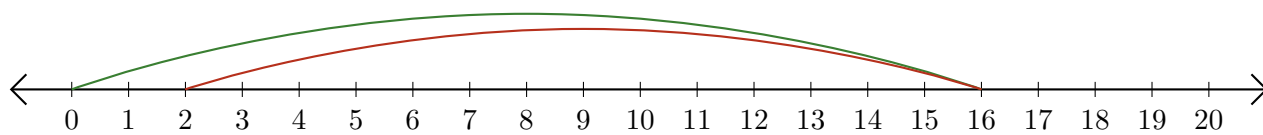
5. $30 - 24 = \underline{\quad}$



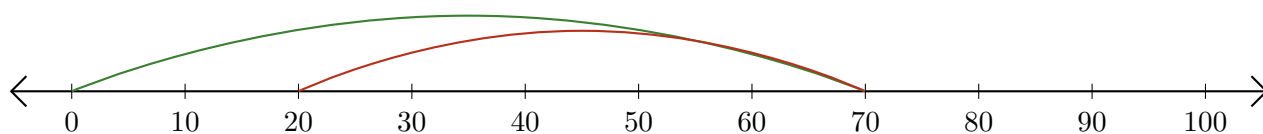
Soustraction de Nombres - Droite Graduée (B) Réponses

Utilisez la droite graduée pour calculer chaque différence.

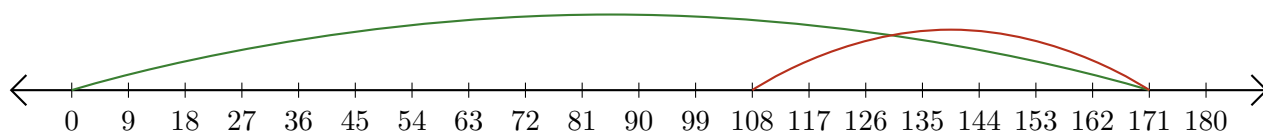
1. $16 - 14 = \underline{2}$



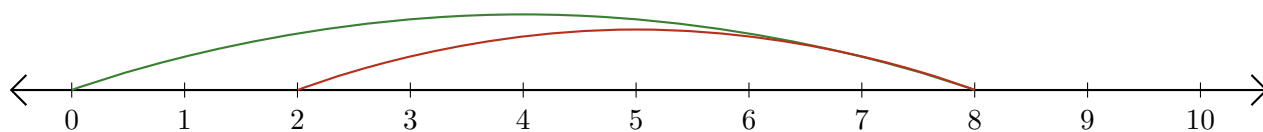
2. $70 - 50 = \underline{20}$



3. $171 - 63 = \underline{108}$



4. $8 - 6 = \underline{2}$



5. $30 - 24 = \underline{6}$

