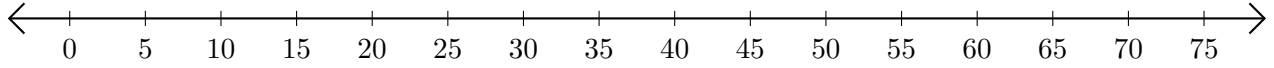


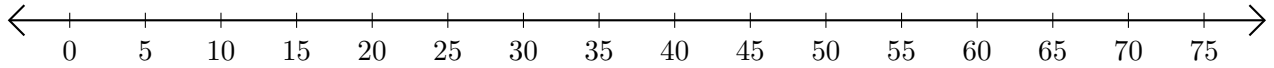
Soustraction de Nombres - Droite Graduée (H)

Utilisez la droite graduée pour calculer chaque différence.

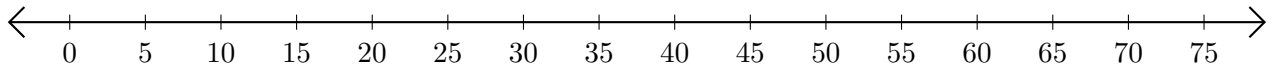
1. $50 - 30 = \underline{\quad}$



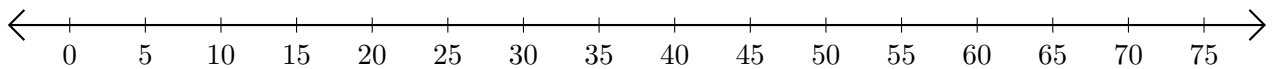
2. $60 - 40 = \underline{\quad}$



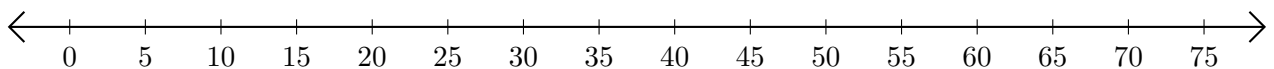
3. $55 - 5 = \underline{\quad}$



4. $35 - 25 = \underline{\quad}$



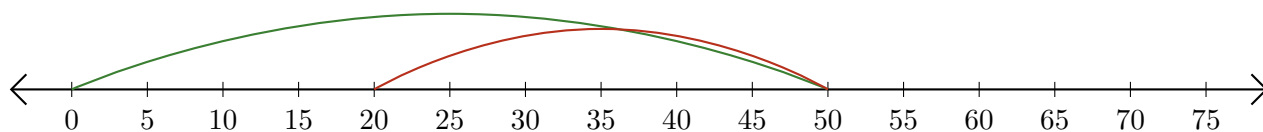
5. $25 - 15 = \underline{\quad}$



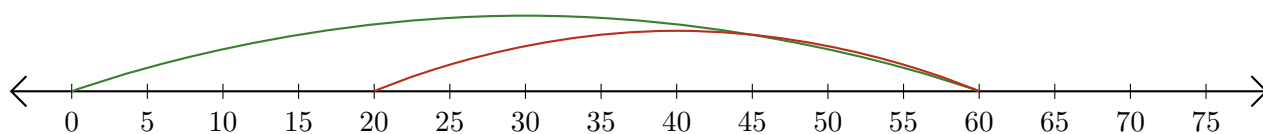
Soustraction de Nombres - Droite Graduée (H) Réponses

Utilisez la droite graduée pour calculer chaque différence.

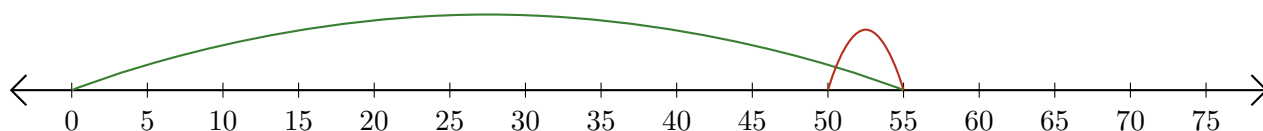
1. $50 - 30 = \underline{20}$



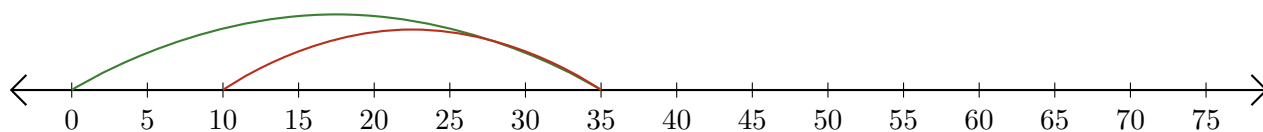
2. $60 - 40 = \underline{20}$



3. $55 - 5 = \underline{50}$



4. $35 - 25 = \underline{10}$



5. $25 - 15 = \underline{10}$

