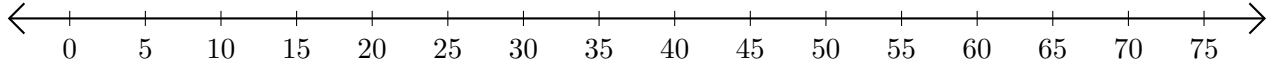


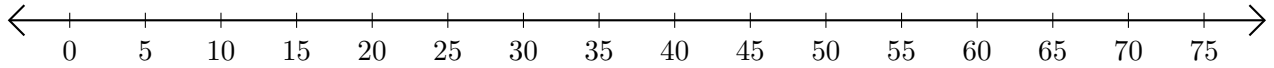
# Soustraction de Nombres - Droite Graduée (F)

Utilisez la droite graduée pour calculer chaque différence.

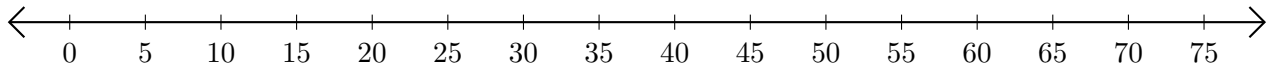
1.  $70 - 45 = \underline{\quad}$



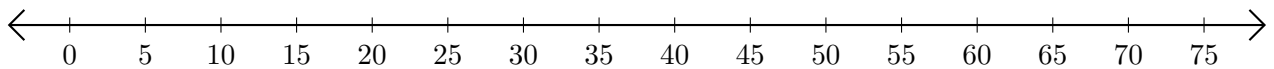
2.  $30 - 5 = \underline{\quad}$



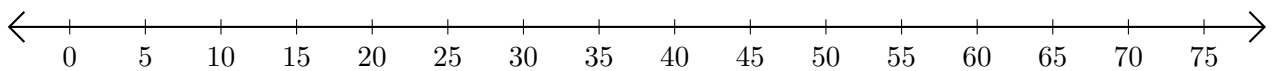
3.  $70 - 40 = \underline{\quad}$



4.  $55 - 30 = \underline{\quad}$



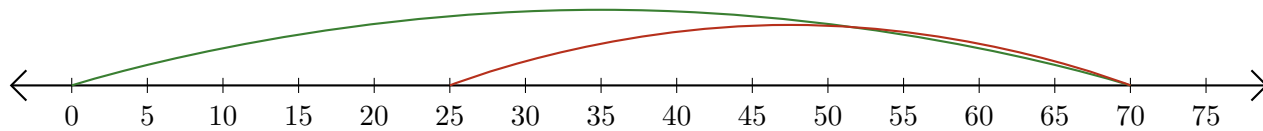
5.  $75 - 65 = \underline{\quad}$




# Soustraction de Nombres - Droite Graduée (F) Réponses

Utilisez la droite graduée pour calculer chaque différence.

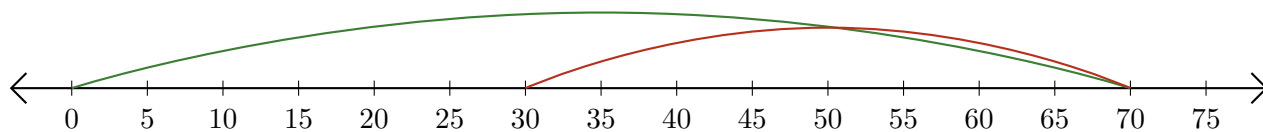
1.  $70 - 45 = \underline{25}$



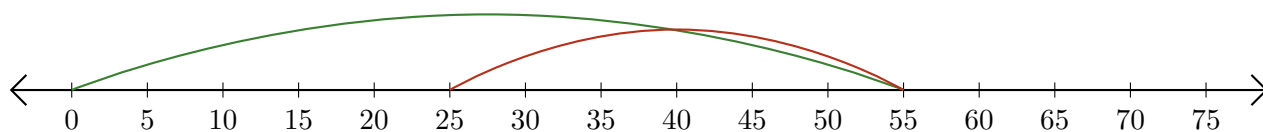
2.  $30 - 5 = \underline{25}$



3.  $70 - 40 = \underline{30}$



4.  $55 - 30 = \underline{25}$



5.  $75 - 65 = \underline{10}$

