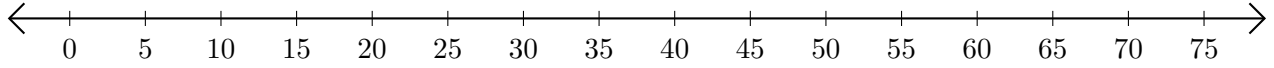


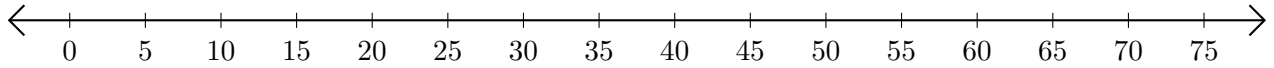
## Soustraction de Nombres - Droite Graduée (D)

Utilisez la droite graduée pour calculer chaque différence.

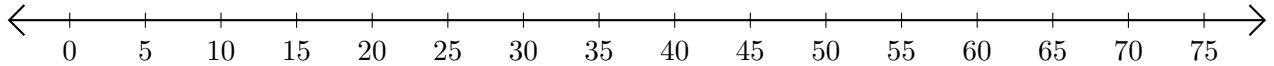
1.  $65 - 55 = \underline{\quad}$



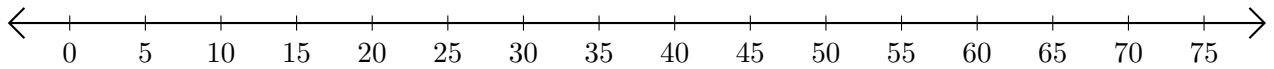
2.  $70 - 5 = \underline{\quad}$



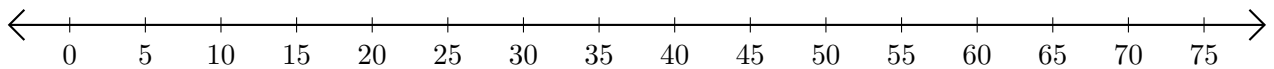
3.  $65 - 30 = \underline{\quad}$



4.  $75 - 65 = \underline{\quad}$



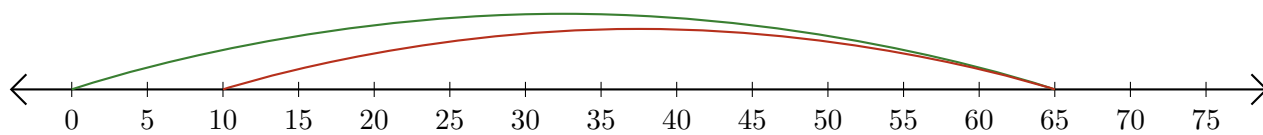
5.  $50 - 45 = \underline{\quad}$



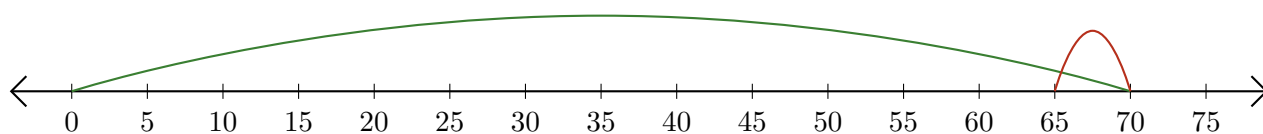
# Soustraction de Nombres - Droite Graduée (D) Réponses

Utilisez la droite graduée pour calculer chaque différence.

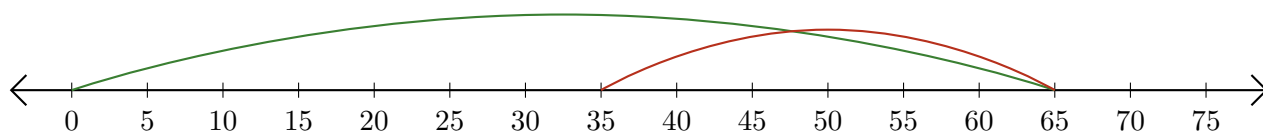
1.  $65 - 55 = \underline{10}$



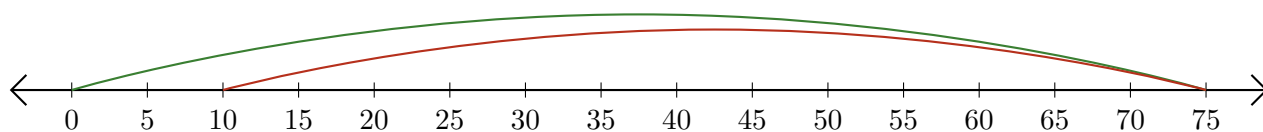
2.  $70 - 5 = \underline{65}$



3.  $65 - 30 = \underline{35}$



4.  $75 - 65 = \underline{10}$



5.  $50 - 45 = \underline{5}$

