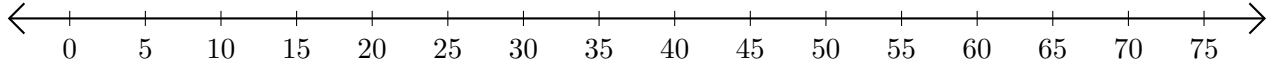


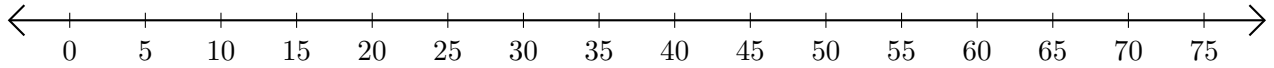
## Soustraction de Nombres - Droite Graduée (B)

Utilisez la droite graduée pour calculer chaque différence.

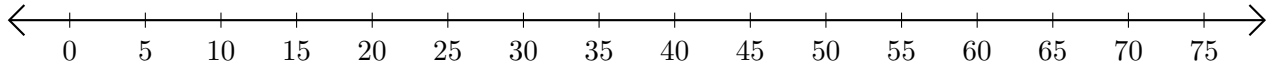
1.  $60 - 35 = \underline{\quad}$



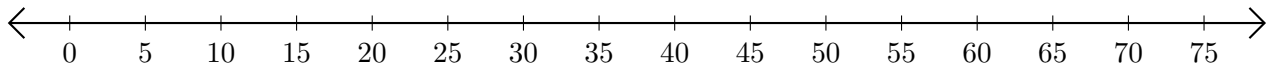
2.  $70 - 65 = \underline{\quad}$



3.  $35 - 30 = \underline{\quad}$



4.  $15 - 10 = \underline{\quad}$



5.  $65 - 15 = \underline{\quad}$

