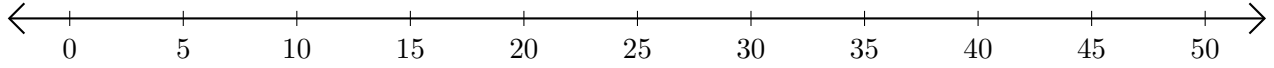


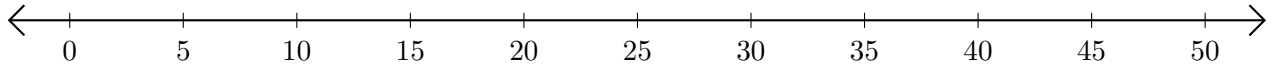
Soustraction de Nombres - Droite Graduée (H)

Utilisez la droite graduée pour calculer chaque différence.

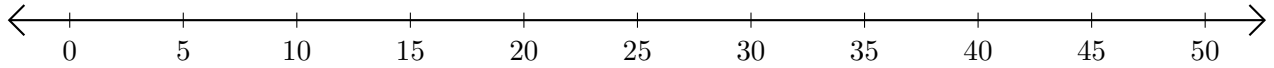
1. $45 - 20 = \underline{\quad}$



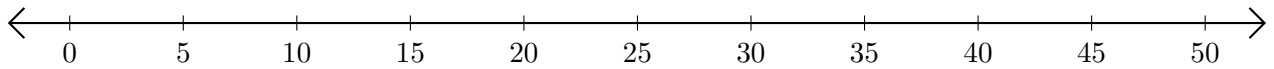
2. $50 - 45 = \underline{\quad}$



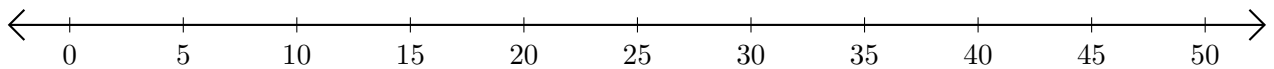
3. $50 - 30 = \underline{\quad}$



4. $15 - 5 = \underline{\quad}$



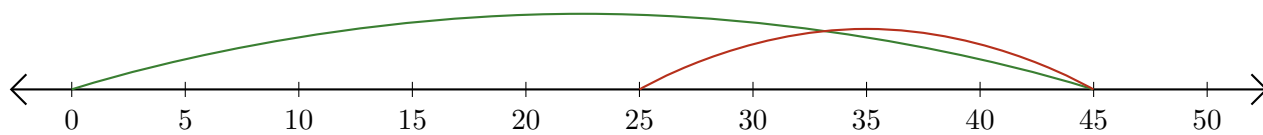
5. $40 - 35 = \underline{\quad}$



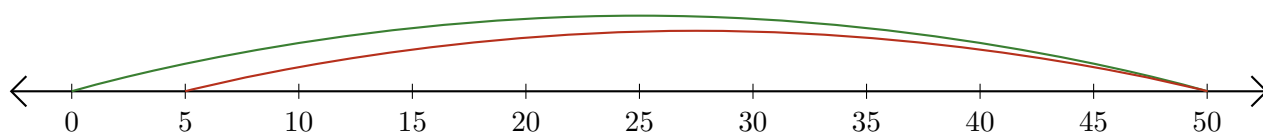
Soustraction de Nombres - Droite Graduée (H) Réponses

Utilisez la droite graduée pour calculer chaque différence.

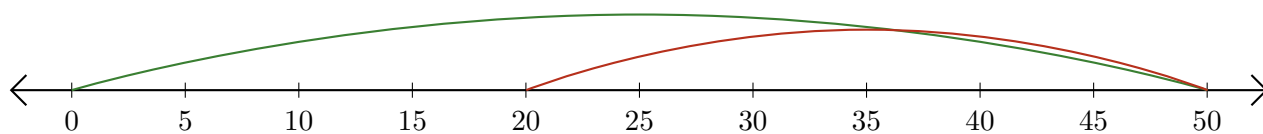
1. $45 - 20 = \underline{25}$



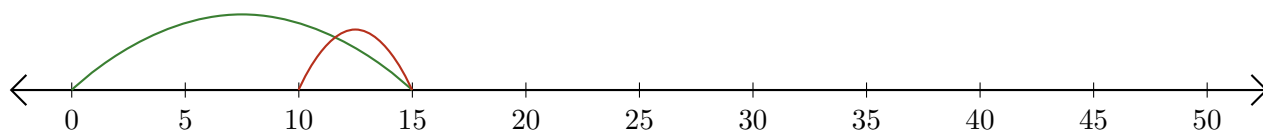
2. $50 - 45 = \underline{5}$



3. $50 - 30 = \underline{20}$



4. $15 - 5 = \underline{10}$



5. $40 - 35 = \underline{5}$

