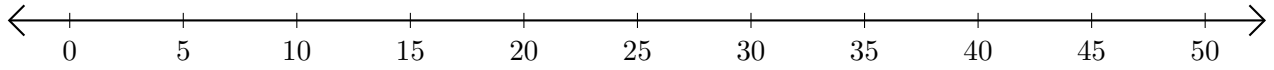


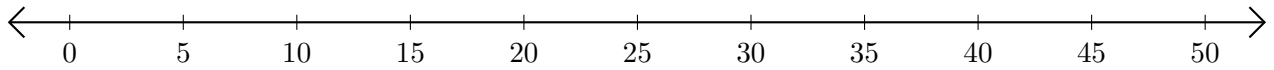
Soustraction de Nombres - Droite Graduée (E)

Utilisez la droite graduée pour calculer chaque différence.

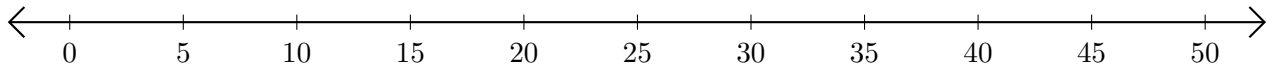
1. $50 - 25 = \underline{\quad}$



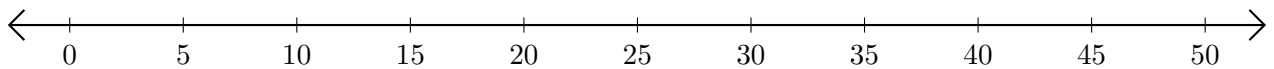
2. $35 - 20 = \underline{\quad}$



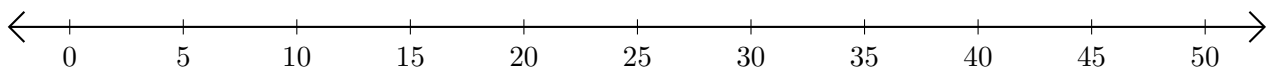
3. $45 - 40 = \underline{\quad}$



4. $50 - 35 = \underline{\quad}$



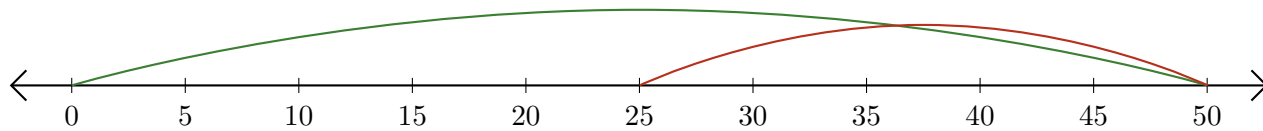
5. $40 - 30 = \underline{\quad}$



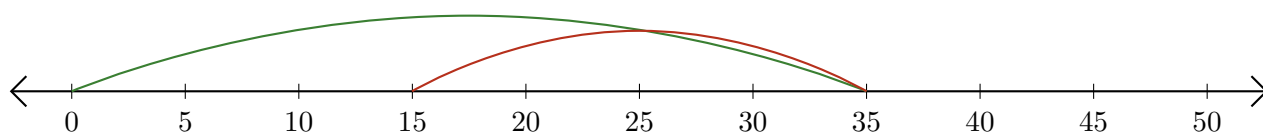
Soustraction de Nombres - Droite Graduée (E) Réponses

Utilisez la droite graduée pour calculer chaque différence.

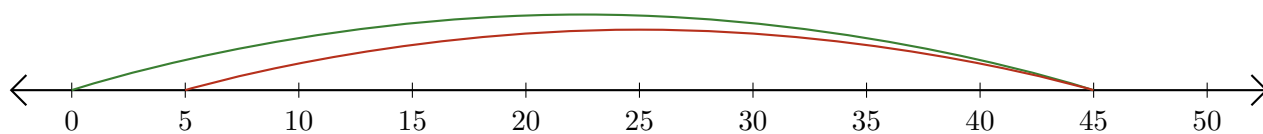
1. $50 - 25 = \underline{25}$



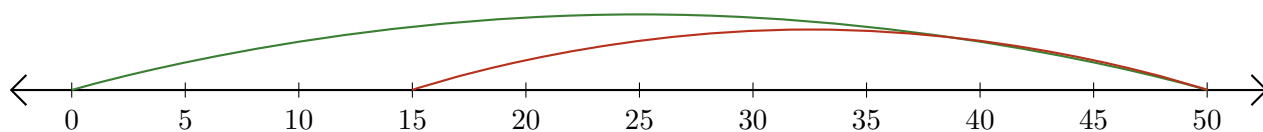
2. $35 - 20 = \underline{15}$



3. $45 - 40 = \underline{5}$



4. $50 - 35 = \underline{15}$



5. $40 - 30 = \underline{10}$

