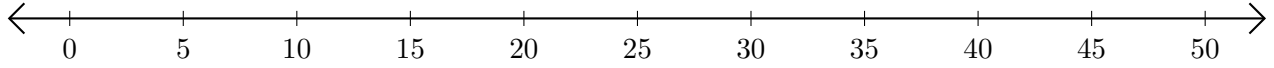


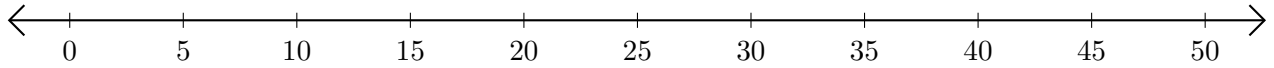
Soustraction de Nombres - Droite Graduée (A)

Utilisez la droite graduée pour calculer chaque différence.

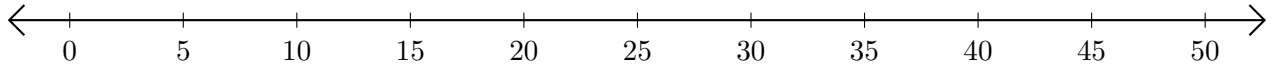
1. $25 - 10 = \underline{\quad}$



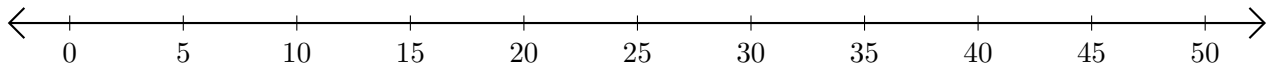
2. $40 - 35 = \underline{\quad}$



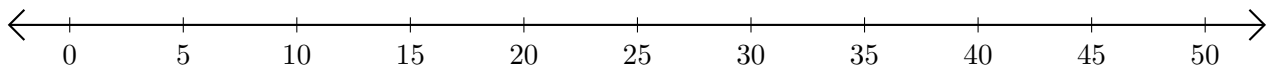
3. $40 - 30 = \underline{\quad}$



4. $50 - 45 = \underline{\quad}$



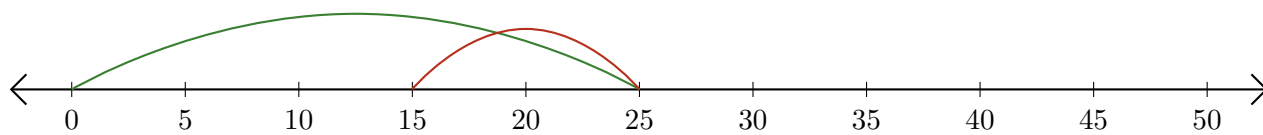
5. $50 - 40 = \underline{\quad}$



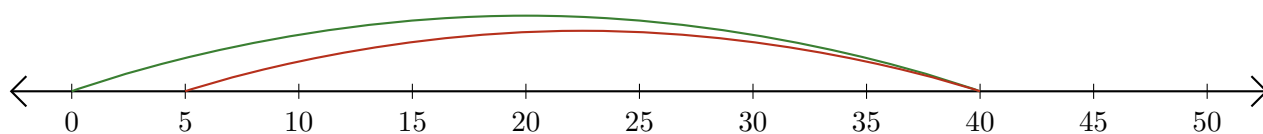
Soustraction de Nombres - Droite Graduée (A) Réponses

Utilisez la droite graduée pour calculer chaque différence.

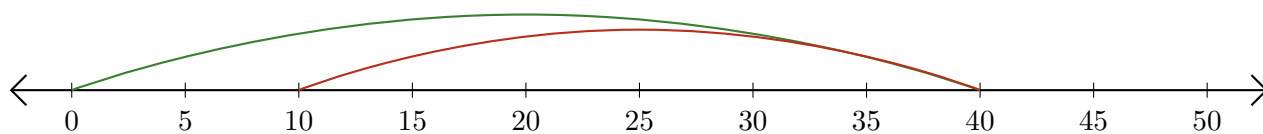
1. $25 - 10 = \underline{15}$



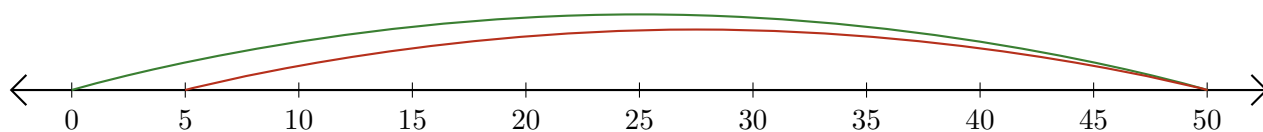
2. $40 - 35 = \underline{5}$



3. $40 - 30 = \underline{10}$



4. $50 - 45 = \underline{5}$



5. $50 - 40 = \underline{10}$

