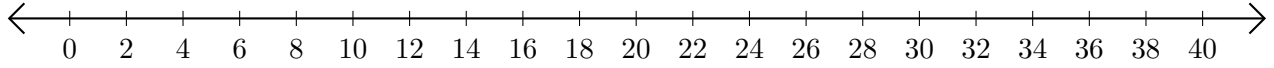


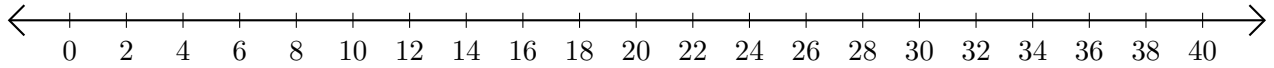
Soustraction de Nombres - Droite Graduée (H)

Utilisez la droite graduée pour calculer chaque différence.

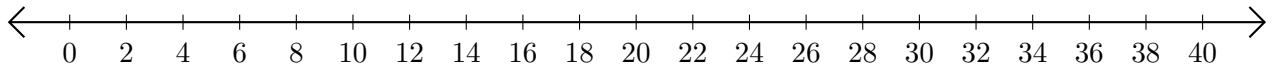
1. $38 - 16 = \underline{\quad}$



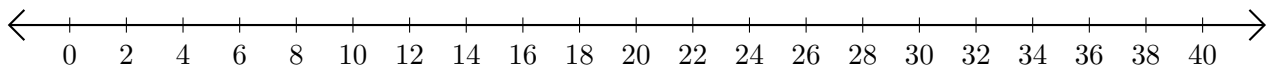
2. $40 - 32 = \underline{\quad}$



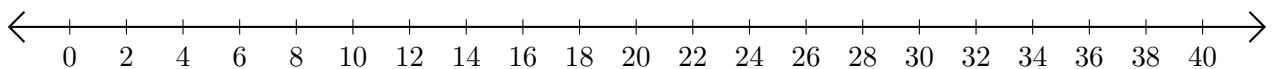
3. $28 - 4 = \underline{\quad}$



4. $40 - 36 = \underline{\quad}$



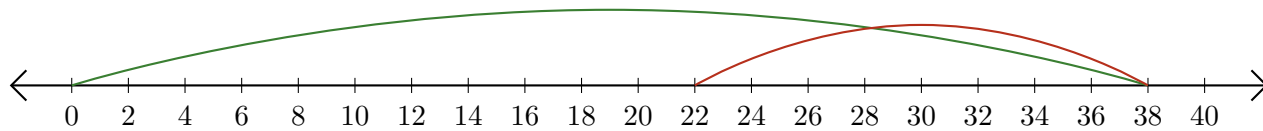
5. $26 - 22 = \underline{\quad}$



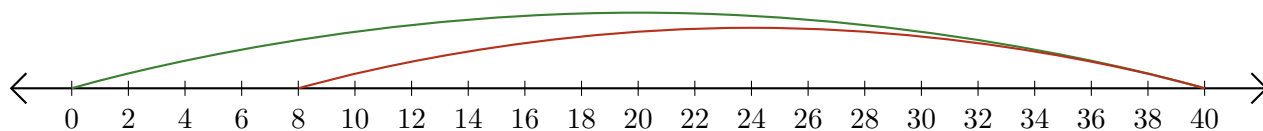
Soustraction de Nombres - Droite Graduée (H) Réponses

Utilisez la droite graduée pour calculer chaque différence.

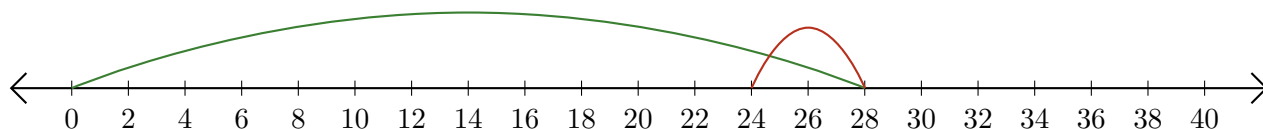
1. $38 - 16 = \underline{22}$



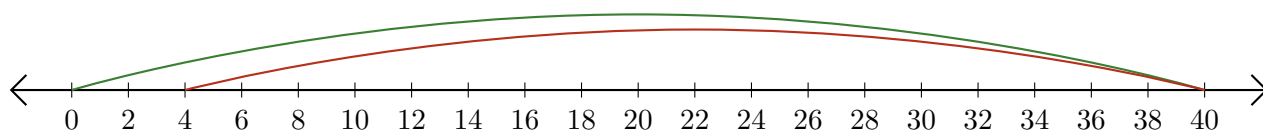
2. $40 - 32 = \underline{8}$



3. $28 - 4 = \underline{24}$



4. $40 - 36 = \underline{4}$



5. $26 - 22 = \underline{4}$

