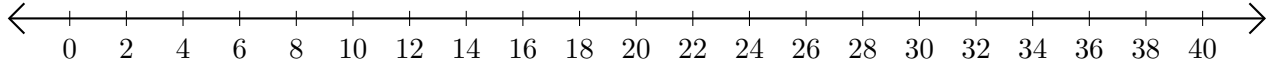


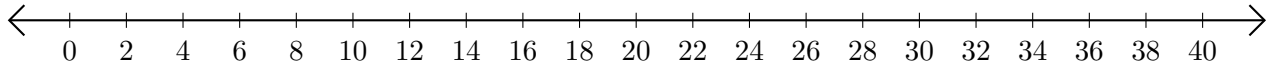
Soustraction de Nombres - Droite Graduée (A)

Utilisez la droite graduée pour calculer chaque différence.

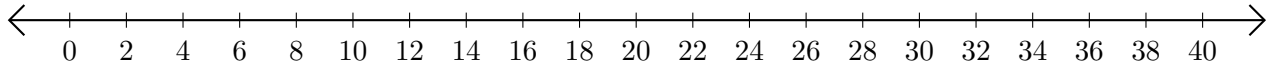
1. $32 - 20 = \underline{\quad}$



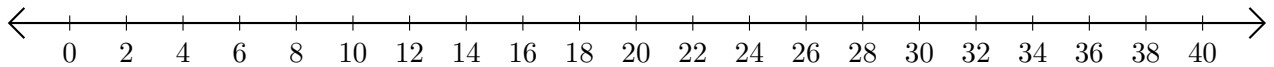
2. $12 - 4 = \underline{\quad}$



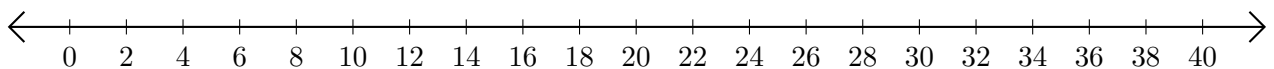
3. $24 - 12 = \underline{\quad}$



4. $28 - 26 = \underline{\quad}$



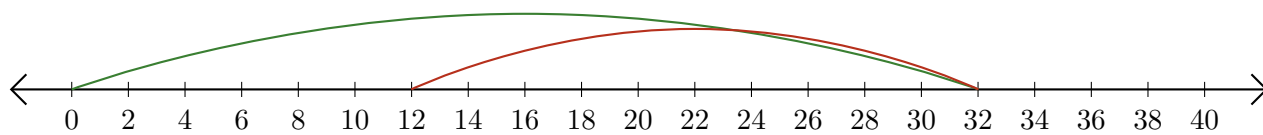
5. $16 - 8 = \underline{\quad}$




Soustraction de Nombres - Droite Graduée (A) Réponses

Utilisez la droite graduée pour calculer chaque différence.

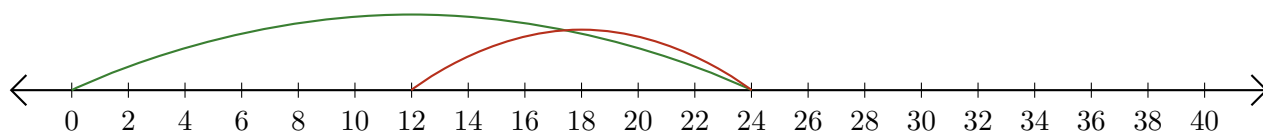
1. $32 - 20 = \underline{12}$



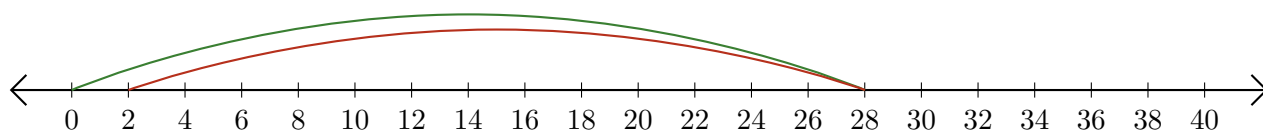
2. $12 - 4 = \underline{8}$



3. $24 - 12 = \underline{12}$



4. $28 - 26 = \underline{2}$



5. $16 - 8 = \underline{8}$

