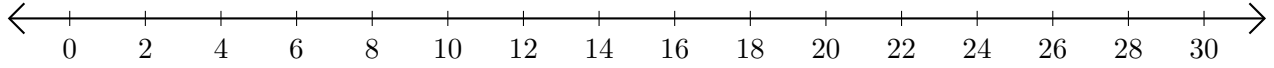


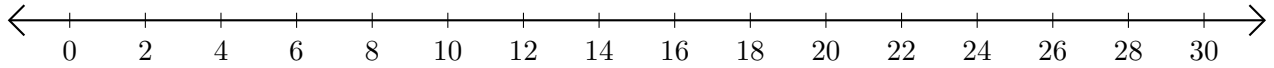
## Soustraction de Nombres - Droite Graduée (D)

Utilisez la droite graduée pour calculer chaque différence.

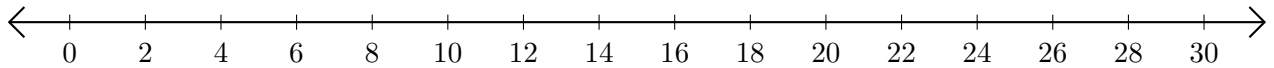
1.  $18 - 10 = \underline{\quad}$



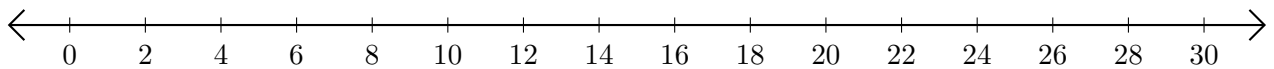
2.  $30 - 6 = \underline{\quad}$



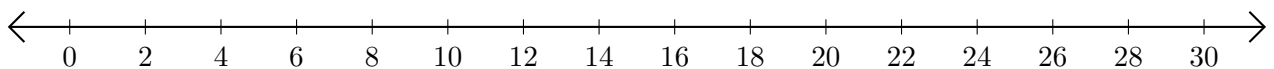
3.  $24 - 20 = \underline{\quad}$



4.  $30 - 12 = \underline{\quad}$



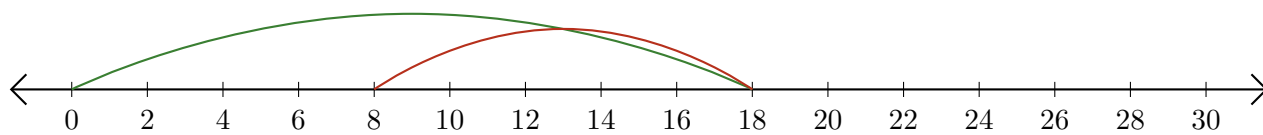
5.  $26 - 22 = \underline{\quad}$



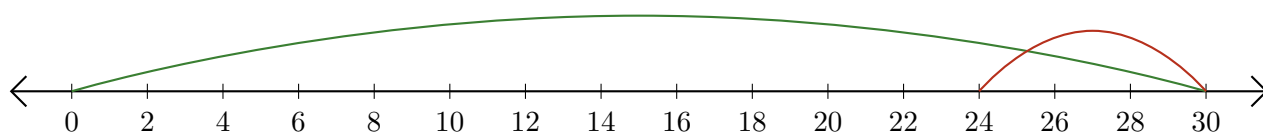
# Soustraction de Nombres - Droite Graduée (D) Réponses

Utilisez la droite graduée pour calculer chaque différence.

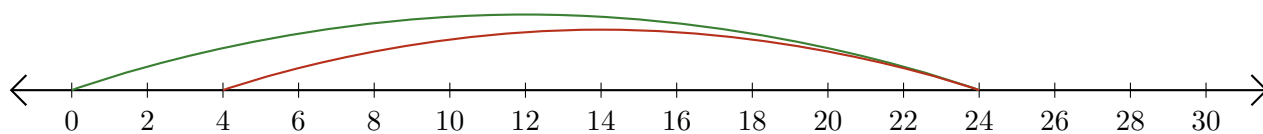
1.  $18 - 10 = \underline{8}$



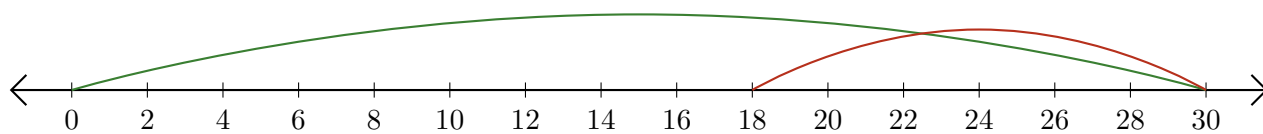
2.  $30 - 6 = \underline{24}$



3.  $24 - 20 = \underline{4}$



4.  $30 - 12 = \underline{18}$



5.  $26 - 22 = \underline{4}$

