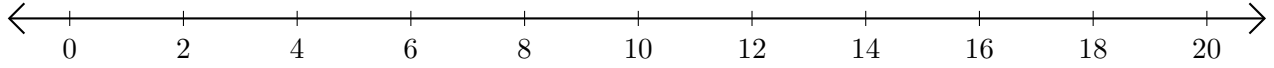


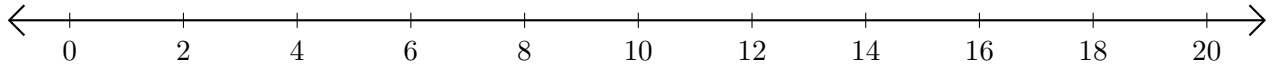
## Soustraction de Nombres - Droite Graduée (D)

Utilisez la droite graduée pour calculer chaque différence.

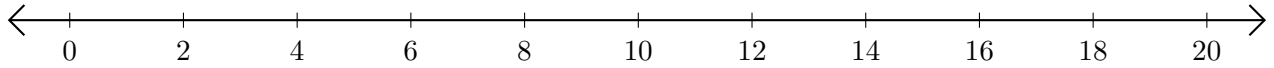
1.  $16 - 12 = \underline{\quad}$



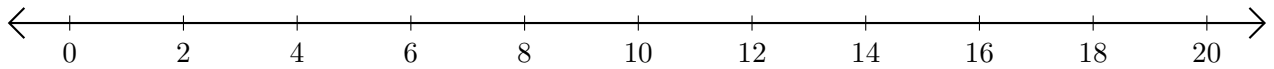
2.  $16 - 4 = \underline{\quad}$



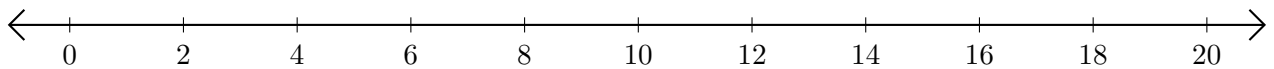
3.  $18 - 16 = \underline{\quad}$



4.  $10 - 2 = \underline{\quad}$



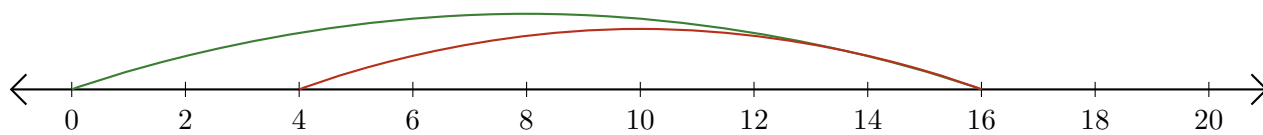
5.  $20 - 14 = \underline{\quad}$



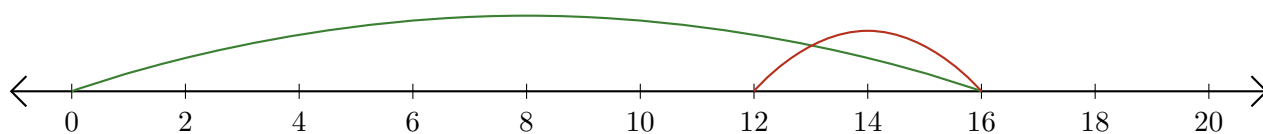
# Soustraction de Nombres - Droite Graduée (D) Réponses

Utilisez la droite graduée pour calculer chaque différence.

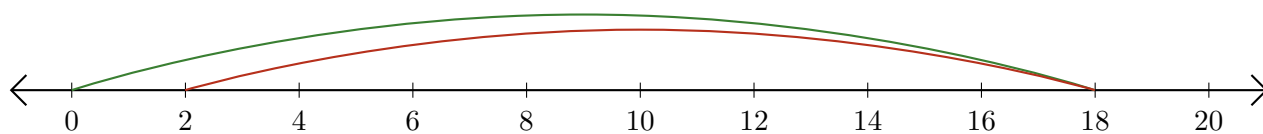
1.  $16 - 12 = \underline{4}$



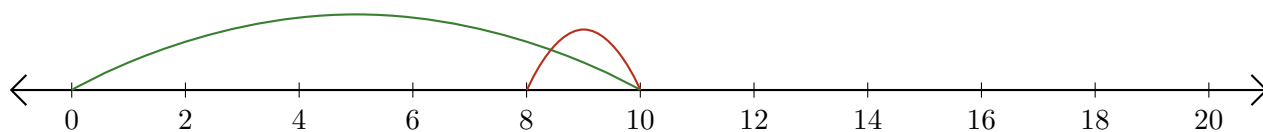
2.  $16 - 4 = \underline{12}$



3.  $18 - 16 = \underline{2}$



4.  $10 - 2 = \underline{8}$



5.  $20 - 14 = \underline{6}$

