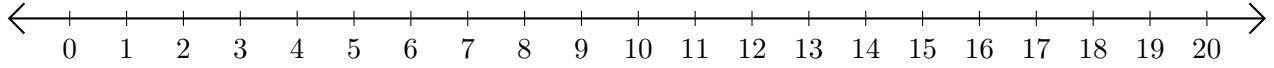


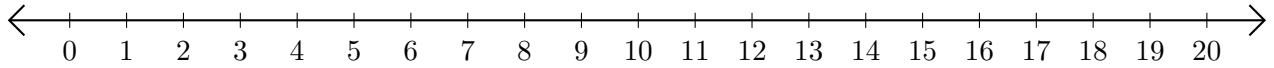
Soustraction de Nombres - Droite Graduée (J)

Utilisez la droite graduée pour calculer chaque différence.

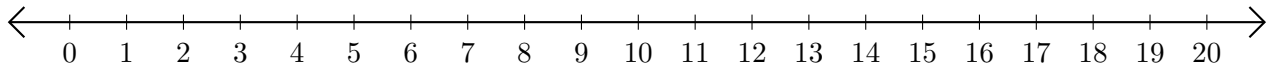
1. $17 - 10 = \underline{\quad}$



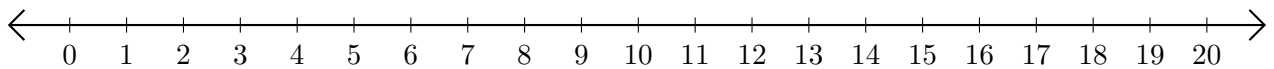
2. $4 - 1 = \underline{\quad}$



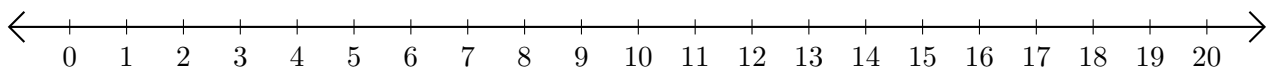
3. $20 - 6 = \underline{\quad}$



4. $18 - 14 = \underline{\quad}$



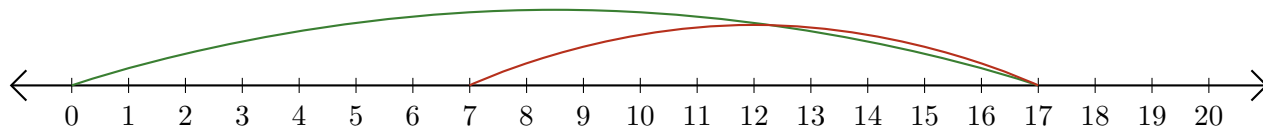
5. $9 - 3 = \underline{\quad}$




Soustraction de Nombres - Droite Graduée (J) Réponses

Utilisez la droite graduée pour calculer chaque différence.

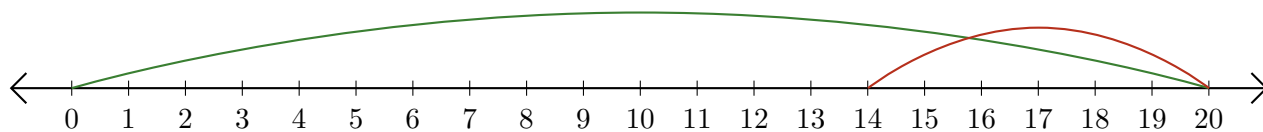
1. $17 - 10 = \underline{7}$



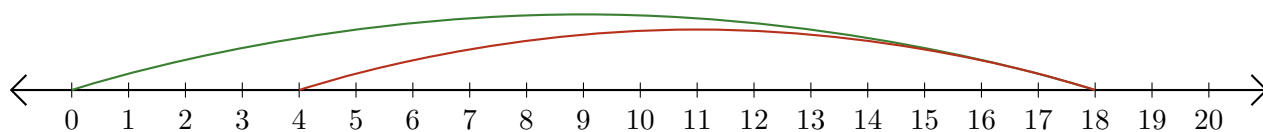
2. $4 - 1 = \underline{3}$



3. $20 - 6 = \underline{14}$



4. $18 - 14 = \underline{4}$



5. $9 - 3 = \underline{6}$

