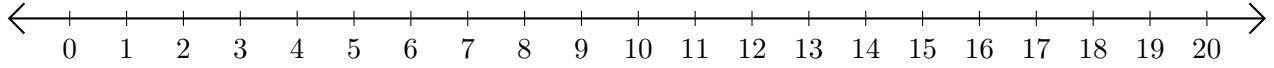


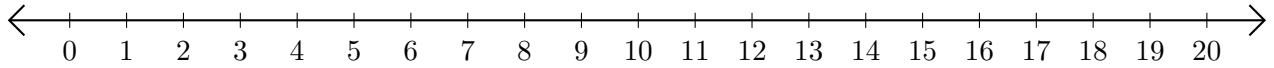
Soustraction de Nombres - Droite Graduée (A)

Utilisez la droite graduée pour calculer chaque différence.

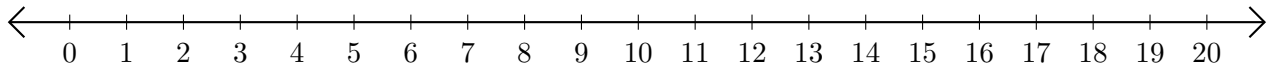
1. $18 - 9 = \underline{\quad}$



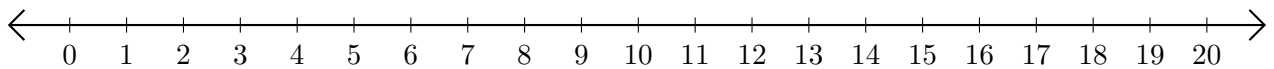
2. $20 - 18 = \underline{\quad}$



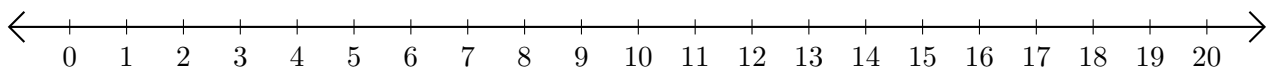
3. $13 - 8 = \underline{\quad}$



4. $7 - 6 = \underline{\quad}$



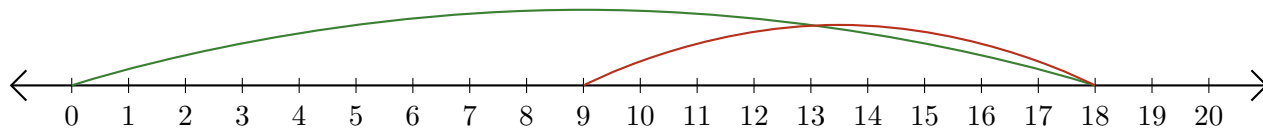
5. $8 - 5 = \underline{\quad}$



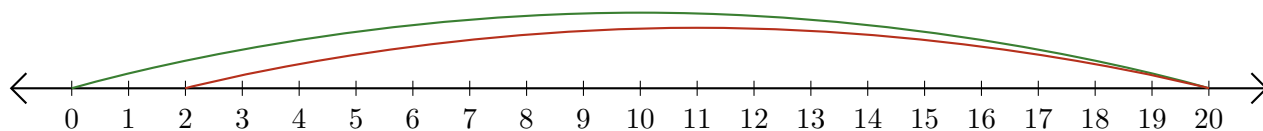
Soustraction de Nombres - Droite Graduée (A) Réponses

Utilisez la droite graduée pour calculer chaque différence.

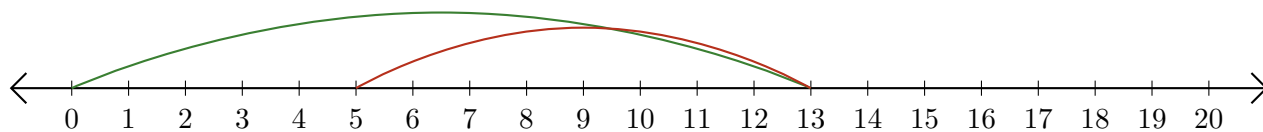
1. $18 - 9 = \underline{9}$



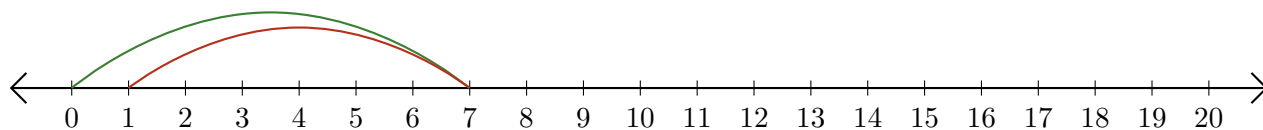
2. $20 - 18 = \underline{2}$



3. $13 - 8 = \underline{5}$



4. $7 - 6 = \underline{1}$



5. $8 - 5 = \underline{3}$

