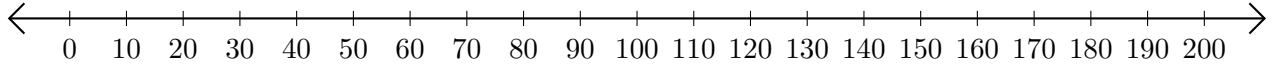


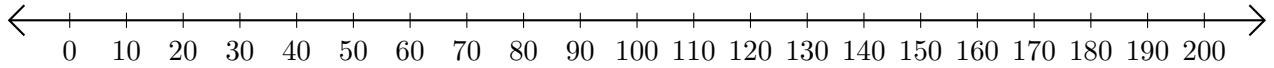
Soustraction de Nombres - Droite Graduée (J)

Utilisez la droite graduée pour calculer chaque différence.

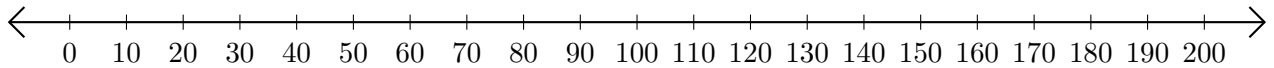
1. $190 - 180 = \underline{\quad}$



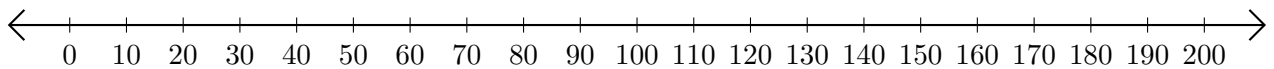
2. $100 - 70 = \underline{\quad}$



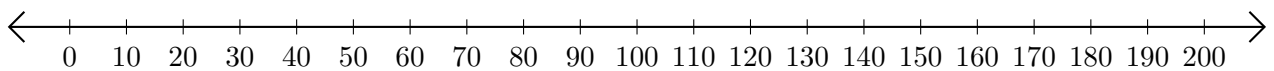
3. $140 - 80 = \underline{\quad}$



4. $120 - 60 = \underline{\quad}$



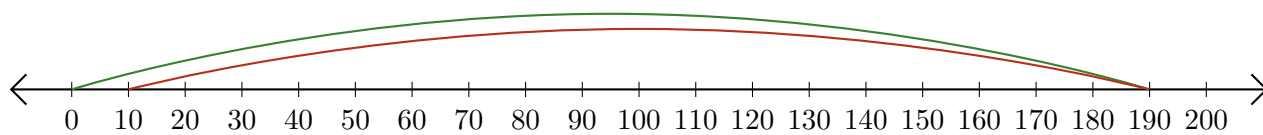
5. $190 - 170 = \underline{\quad}$



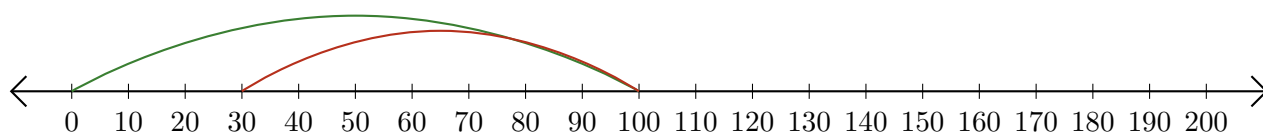
Soustraction de Nombres - Droite Graduée (J) Réponses

Utilisez la droite graduée pour calculer chaque différence.

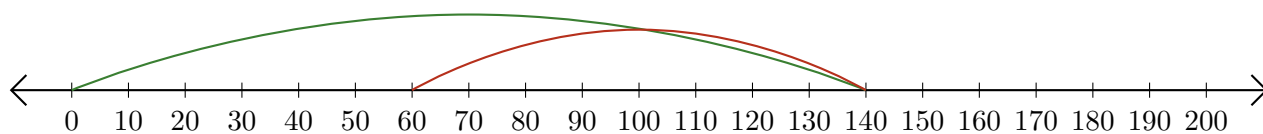
1. $190 - 180 = \underline{10}$



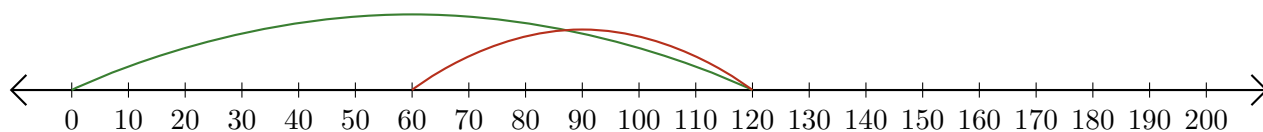
2. $100 - 70 = \underline{30}$



3. $140 - 80 = \underline{60}$



4. $120 - 60 = \underline{60}$



5. $190 - 170 = \underline{20}$

