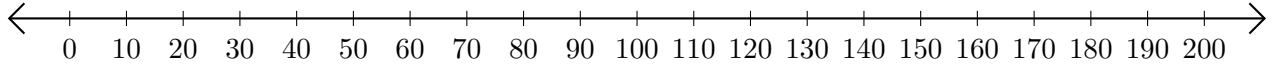


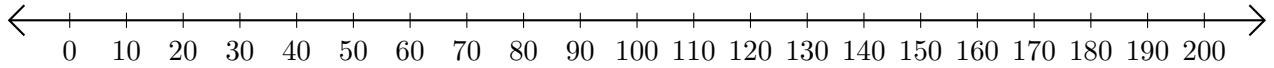
Soustraction de Nombres - Droite Graduée (B)

Utilisez la droite graduée pour calculer chaque différence.

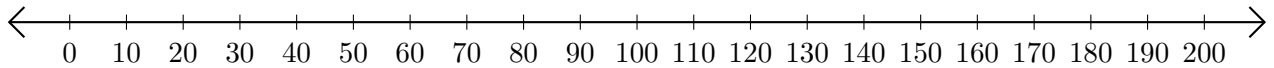
1. $160 - 140 = \underline{\hspace{2cm}}$



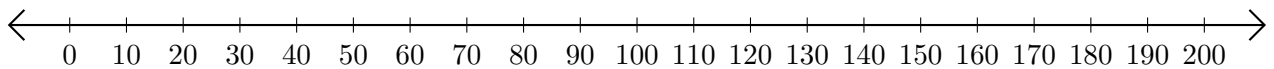
2. $170 - 130 = \underline{\hspace{2cm}}$



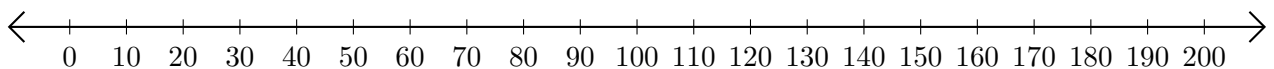
3. $200 - 190 = \underline{\hspace{2cm}}$



4. $150 - 40 = \underline{\hspace{2cm}}$



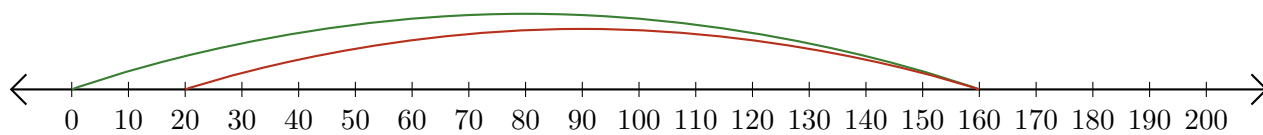
5. $160 - 150 = \underline{\hspace{2cm}}$



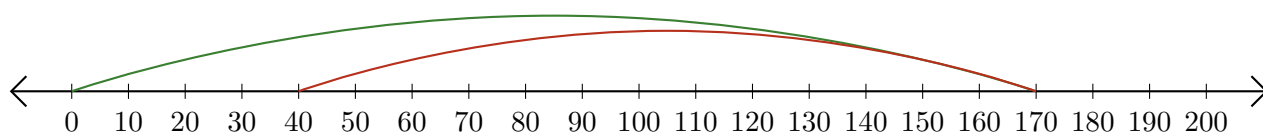
Soustraction de Nombres - Droite Graduée (B) Réponses

Utilisez la droite graduée pour calculer chaque différence.

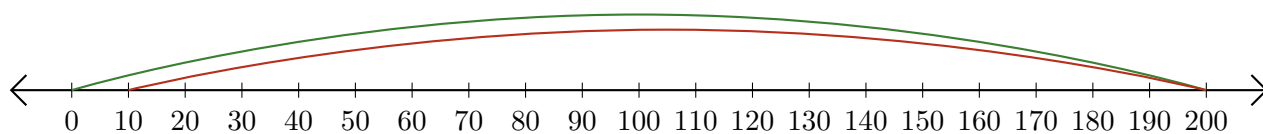
1. $160 - 140 = \underline{20}$



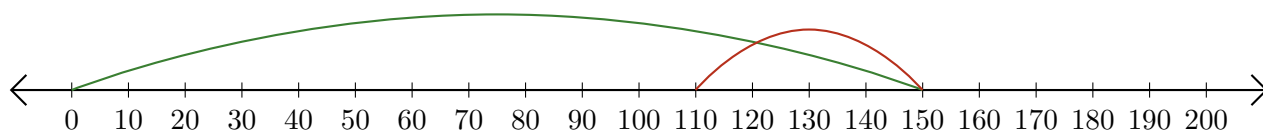
2. $170 - 130 = \underline{40}$



3. $200 - 190 = \underline{10}$



4. $150 - 40 = \underline{110}$



5. $160 - 150 = \underline{10}$

