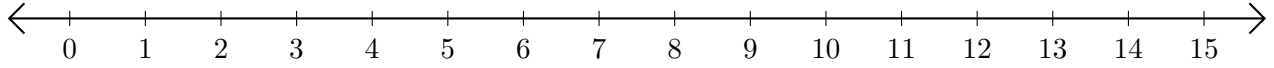


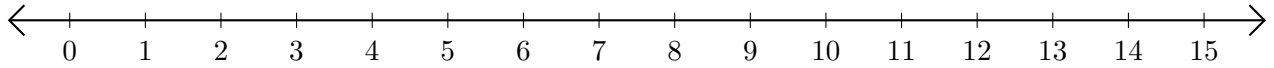
Soustraction de Nombres - Droite Graduée (H)

Utilisez la droite graduée pour calculer chaque différence.

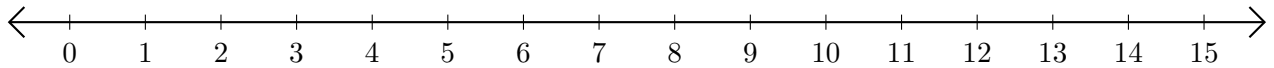
1. $15 - 11 = \underline{\quad}$



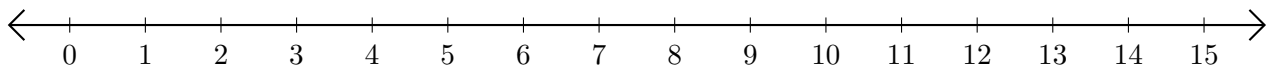
2. $14 - 13 = \underline{\quad}$



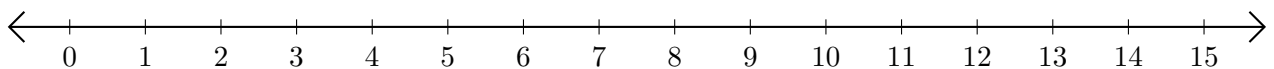
3. $15 - 12 = \underline{\quad}$



4. $11 - 7 = \underline{\quad}$



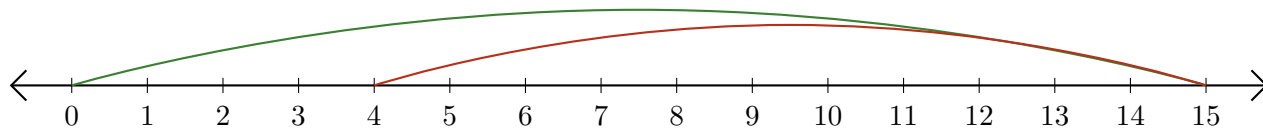
5. $15 - 4 = \underline{\quad}$



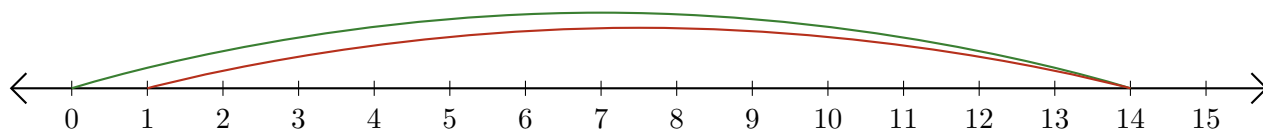
Soustraction de Nombres - Droite Graduée (H) Réponses

Utilisez la droite graduée pour calculer chaque différence.

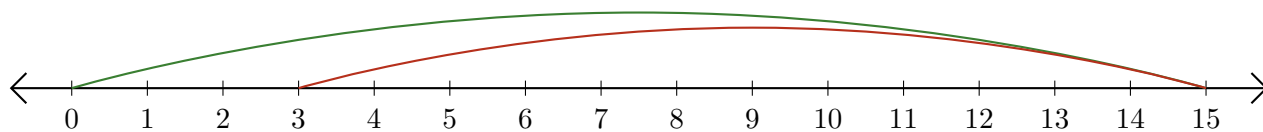
1. $15 - 11 = \underline{4}$



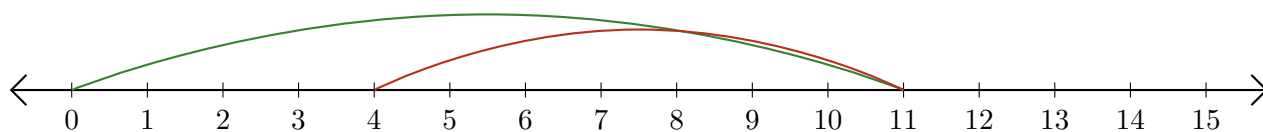
2. $14 - 13 = \underline{1}$



3. $15 - 12 = \underline{3}$



4. $11 - 7 = \underline{4}$



5. $15 - 4 = \underline{11}$

