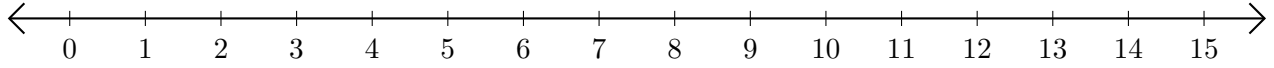


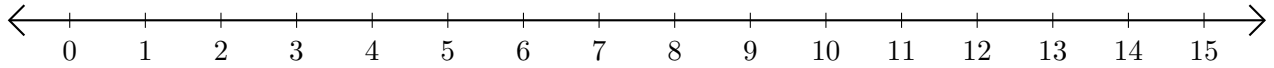
Soustraction de Nombres - Droite Graduée (A)

Utilisez la droite graduée pour calculer chaque différence.

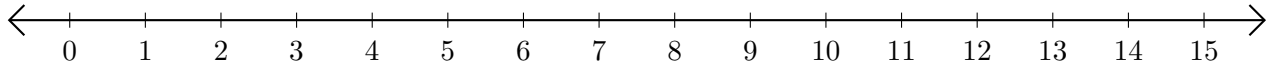
1. $8 - 6 = \underline{\quad}$



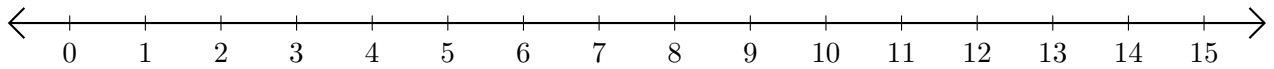
2. $10 - 5 = \underline{\quad}$



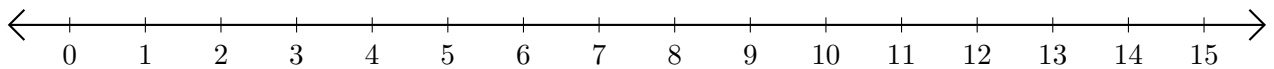
3. $8 - 2 = \underline{\quad}$



4. $15 - 10 = \underline{\quad}$



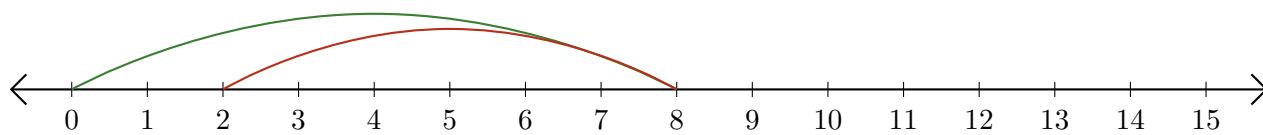
5. $13 - 11 = \underline{\quad}$



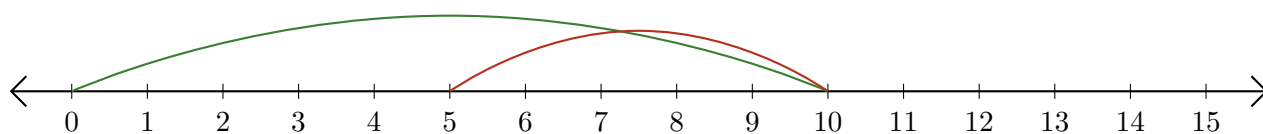
Soustraction de Nombres - Droite Graduée (A) Réponses

Utilisez la droite graduée pour calculer chaque différence.

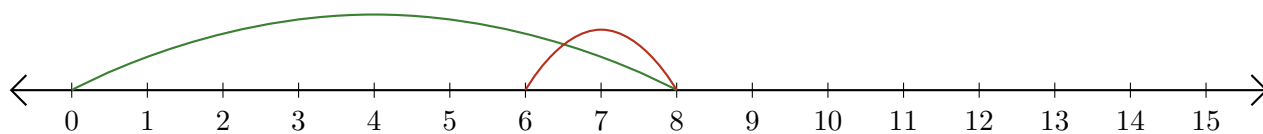
1. $8 - 6 = \underline{2}$



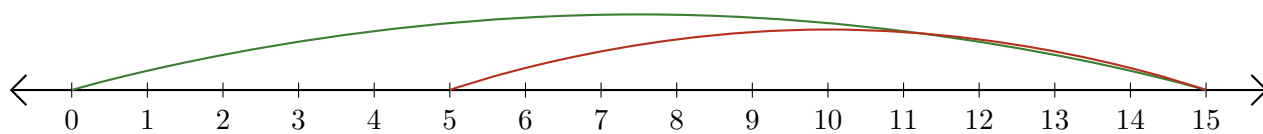
2. $10 - 5 = \underline{5}$



3. $8 - 2 = \underline{6}$



4. $15 - 10 = \underline{5}$



5. $13 - 11 = \underline{2}$

