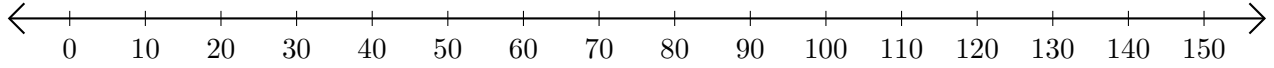


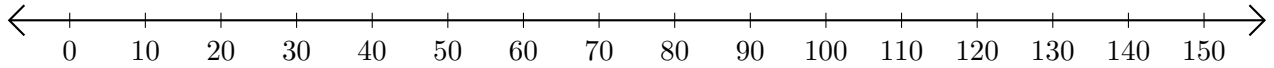
# Soustraction de Nombres - Droite Graduée (J)

Utilisez la droite graduée pour calculer chaque différence.

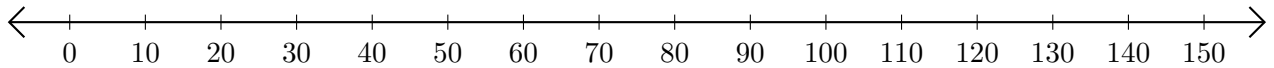
1.  $120 - 10 = \underline{\hspace{2cm}}$



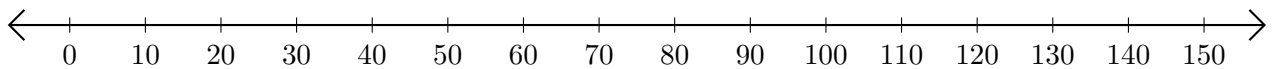
2.  $110 - 100 = \underline{\hspace{2cm}}$



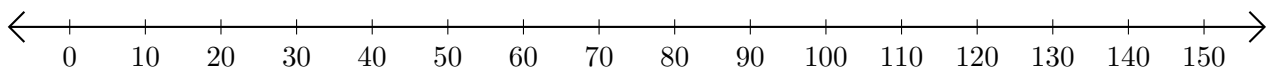
3.  $60 - 50 = \underline{\hspace{2cm}}$



4.  $70 - 40 = \underline{\hspace{2cm}}$



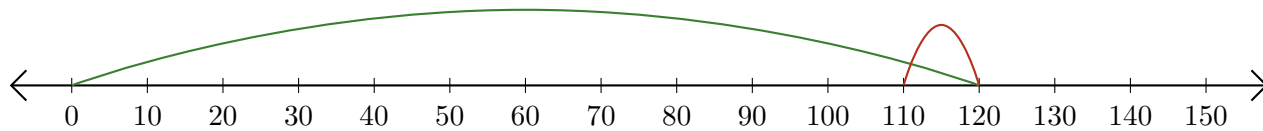
5.  $110 - 90 = \underline{\hspace{2cm}}$



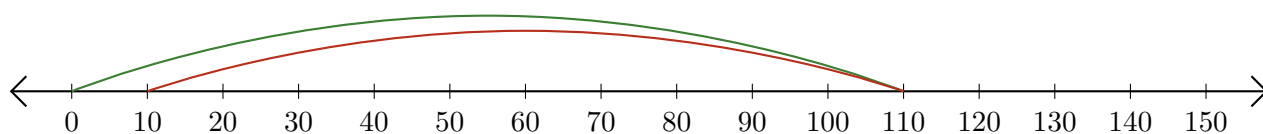
# Soustraction de Nombres - Droite Graduée (J) Réponses

Utilisez la droite graduée pour calculer chaque différence.

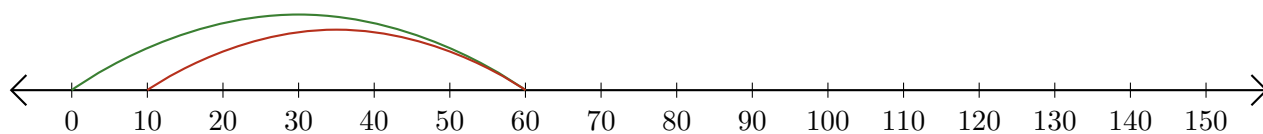
1.  $120 - 10 = \underline{110}$



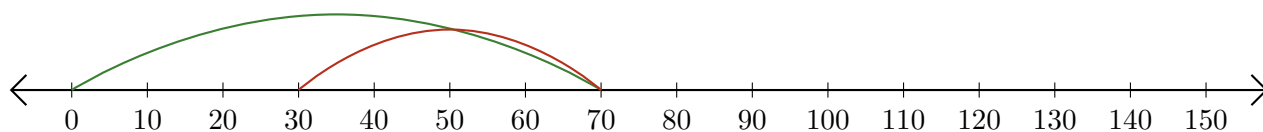
2.  $110 - 100 = \underline{10}$



3.  $60 - 50 = \underline{10}$



4.  $70 - 40 = \underline{30}$



5.  $110 - 90 = \underline{20}$

