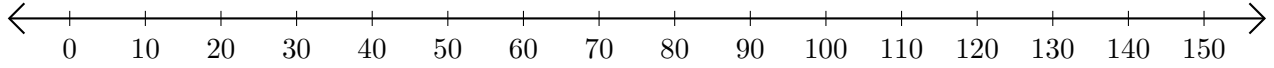


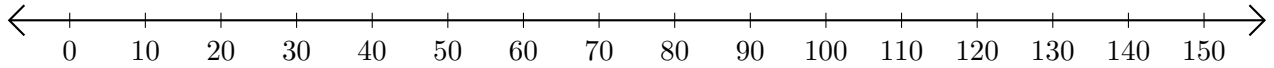
Soustraction de Nombres - Droite Graduée (G)

Utilisez la droite graduée pour calculer chaque différence.

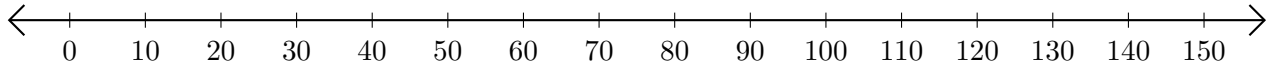
1. $120 - 70 = \underline{\quad}$



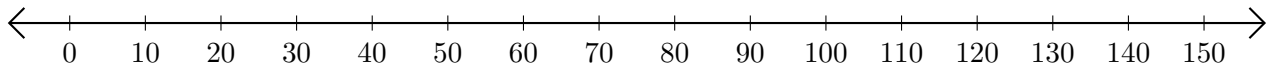
2. $40 - 30 = \underline{\quad}$



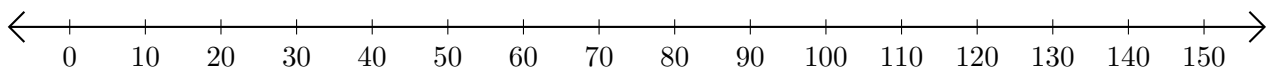
3. $40 - 20 = \underline{\quad}$



4. $140 - 110 = \underline{\quad}$



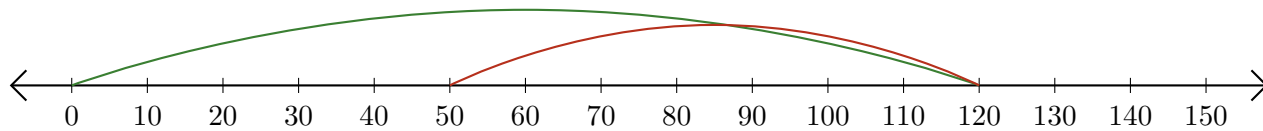
5. $110 - 50 = \underline{\quad}$



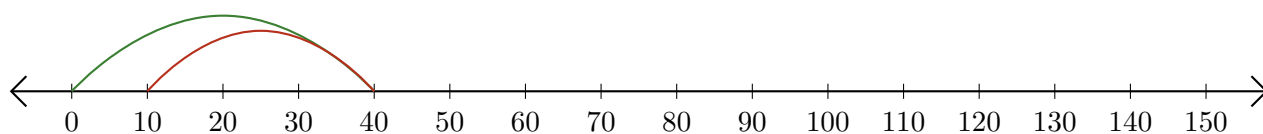
Soustraction de Nombres - Droite Graduée (G) Réponses

Utilisez la droite graduée pour calculer chaque différence.

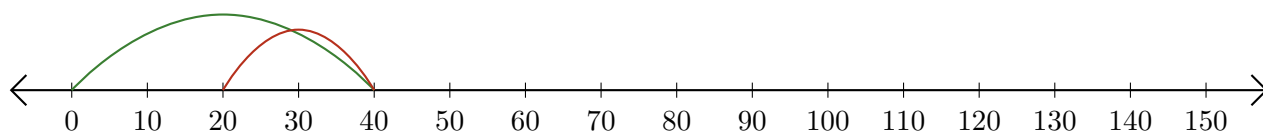
1. $120 - 70 = \underline{50}$



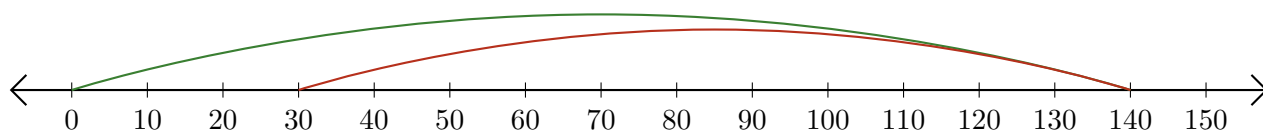
2. $40 - 30 = \underline{10}$



3. $40 - 20 = \underline{20}$



4. $140 - 110 = \underline{30}$



5. $110 - 50 = \underline{60}$

