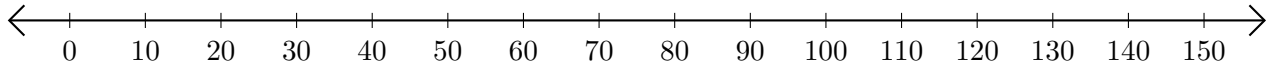


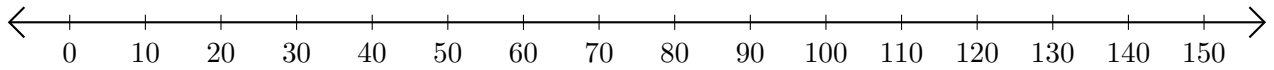
Soustraction de Nombres - Droite Graduée (F)

Utilisez la droite graduée pour calculer chaque différence.

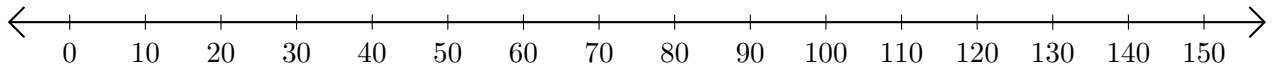
1. $110 - 20 = \underline{\quad}$



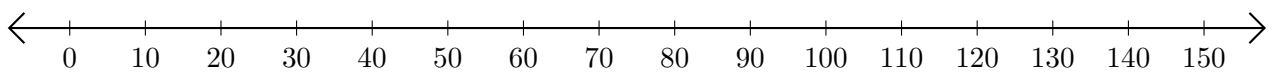
2. $130 - 120 = \underline{\quad}$



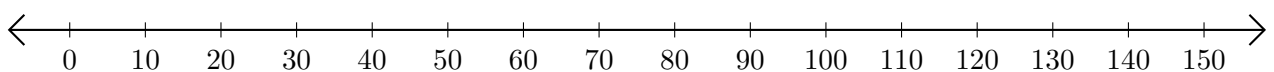
3. $90 - 30 = \underline{\quad}$



4. $150 - 140 = \underline{\quad}$



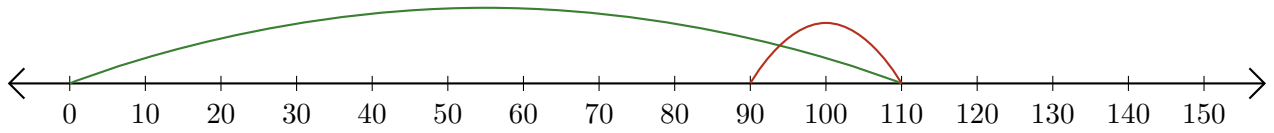
5. $110 - 80 = \underline{\quad}$



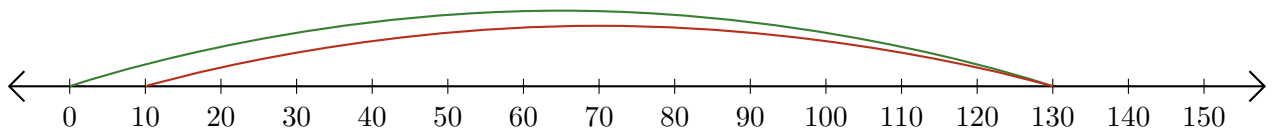
Soustraction de Nombres - Droite Graduée (F) Réponses

Utilisez la droite graduée pour calculer chaque différence.

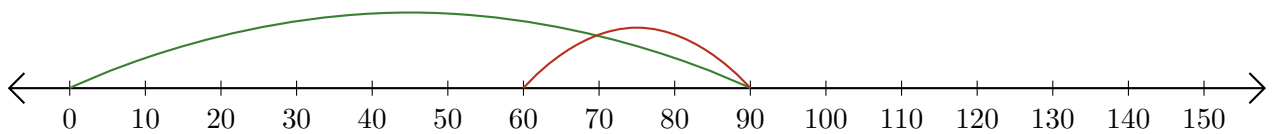
1. $110 - 20 = \underline{90}$



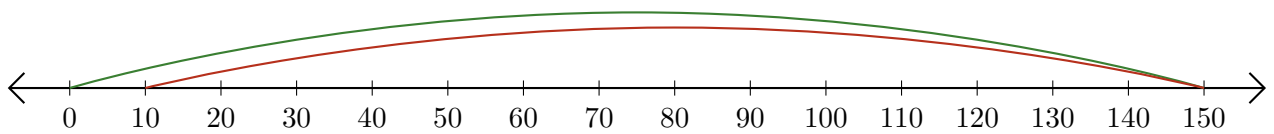
2. $130 - 120 = \underline{10}$



3. $90 - 30 = \underline{60}$



4. $150 - 140 = \underline{10}$



5. $110 - 80 = \underline{30}$

