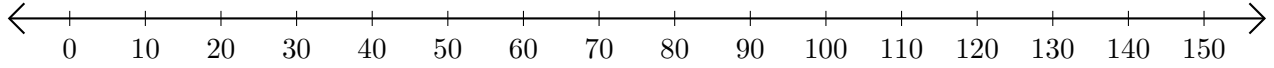


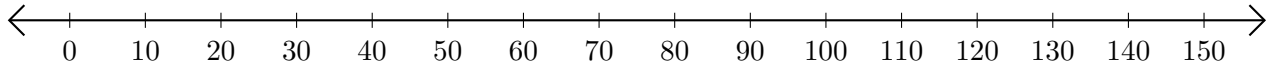
Soustraction de Nombres - Droite Graduée (C)

Utilisez la droite graduée pour calculer chaque différence.

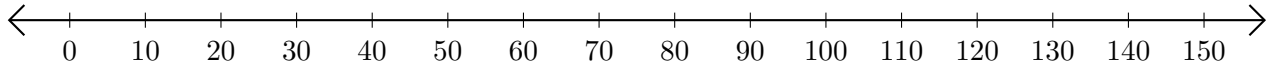
1. $110 - 90 = \underline{\quad}$



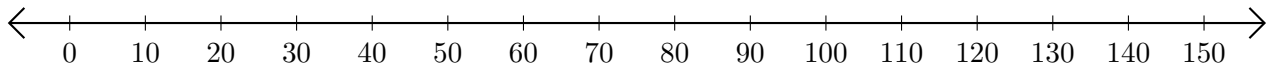
2. $80 - 40 = \underline{\quad}$



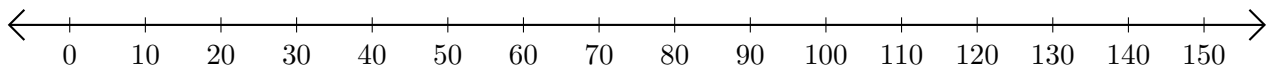
3. $140 - 60 = \underline{\quad}$



4. $80 - 50 = \underline{\quad}$



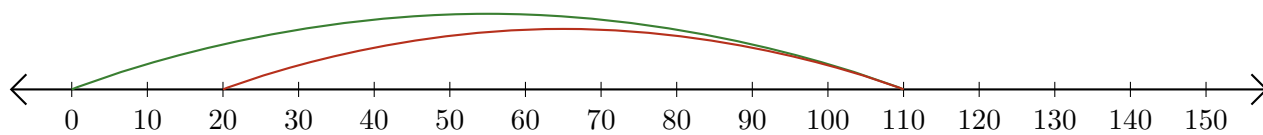
5. $150 - 140 = \underline{\quad}$



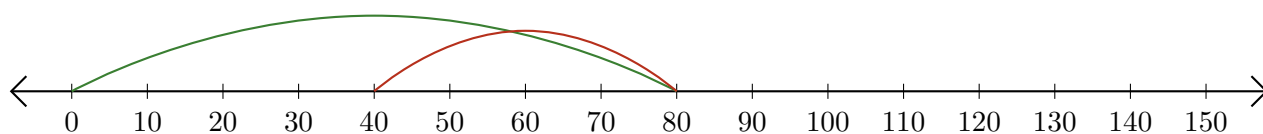
Soustraction de Nombres - Droite Graduée (C) Réponses

Utilisez la droite graduée pour calculer chaque différence.

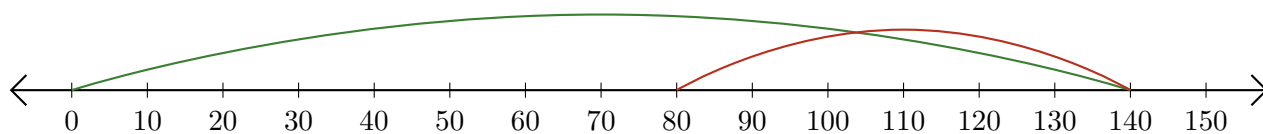
1. $110 - 90 = \underline{20}$



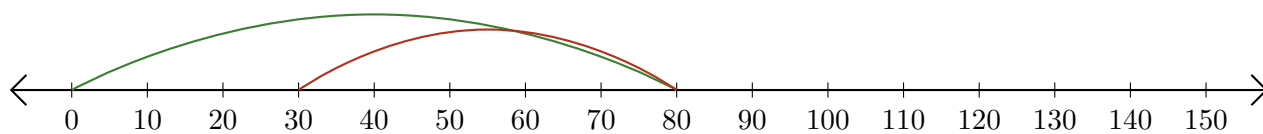
2. $80 - 40 = \underline{40}$



3. $140 - 60 = \underline{80}$



4. $80 - 50 = \underline{30}$



5. $150 - 140 = \underline{10}$

