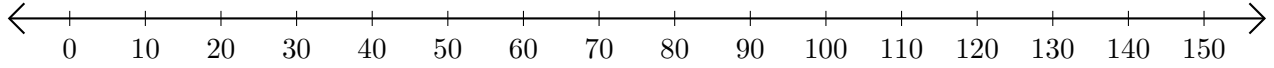


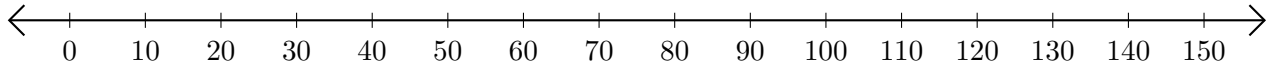
Soustraction de Nombres - Droite Graduée (B)

Utilisez la droite graduée pour calculer chaque différence.

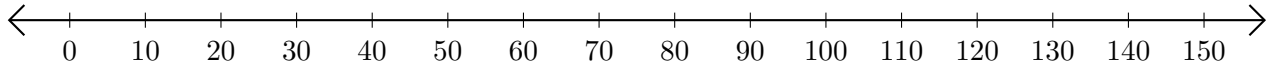
1. $140 - 120 = \underline{\quad}$



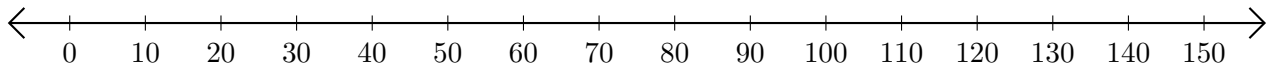
2. $120 - 90 = \underline{\quad}$



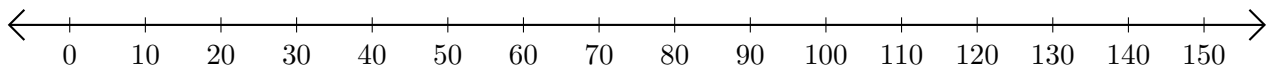
3. $150 - 140 = \underline{\quad}$



4. $30 - 20 = \underline{\quad}$



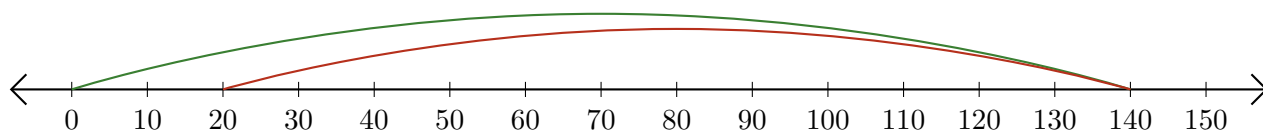
5. $100 - 60 = \underline{\quad}$



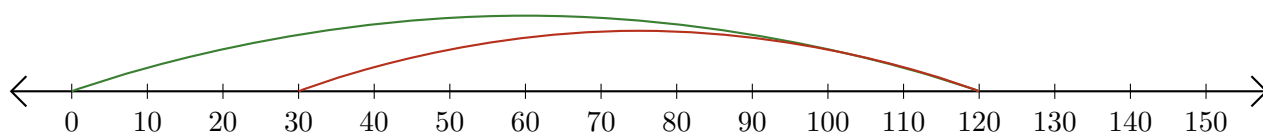
Soustraction de Nombres - Droite Graduée (B) Réponses

Utilisez la droite graduée pour calculer chaque différence.

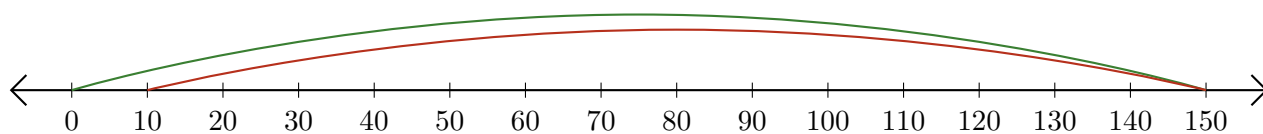
1. $140 - 120 = \underline{20}$



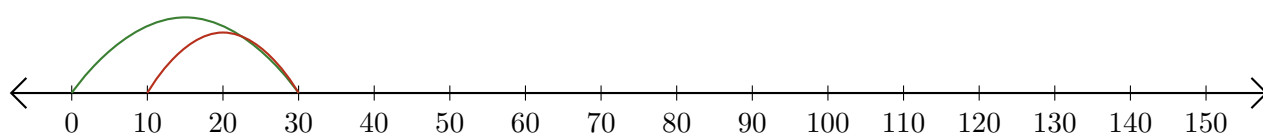
2. $120 - 90 = \underline{30}$



3. $150 - 140 = \underline{10}$



4. $30 - 20 = \underline{10}$



5. $100 - 60 = \underline{40}$

