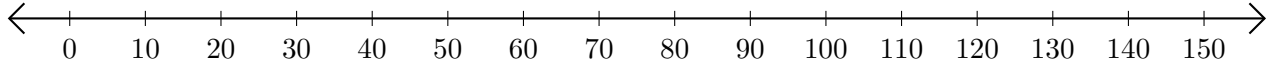


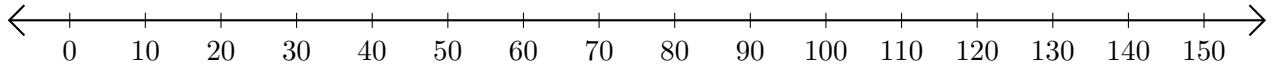
Soustraction de Nombres - Droite Graduée (A)

Utilisez la droite graduée pour calculer chaque différence.

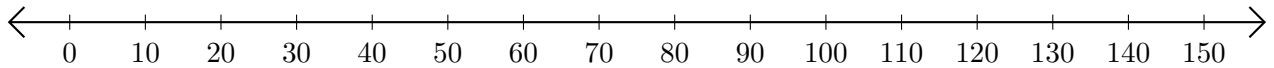
1. $130 - 90 = \underline{\quad}$



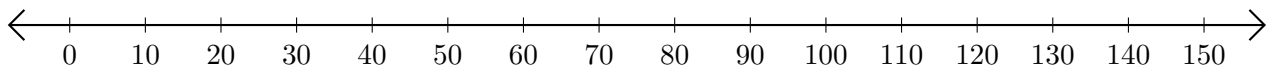
2. $150 - 140 = \underline{\quad}$



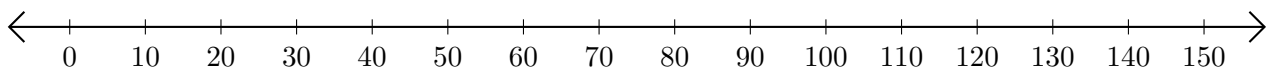
3. $130 - 100 = \underline{\quad}$



4. $20 - 10 = \underline{\quad}$



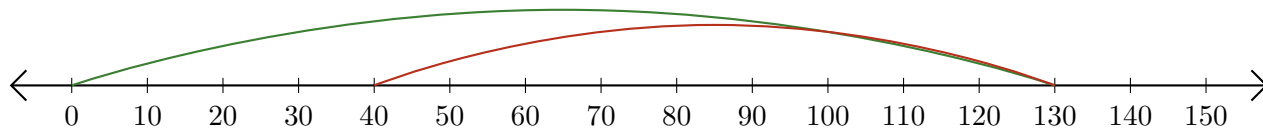
5. $120 - 80 = \underline{\quad}$



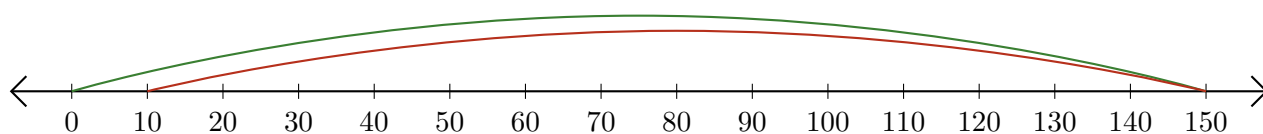
Soustraction de Nombres - Droite Graduée (A) Réponses

Utilisez la droite graduée pour calculer chaque différence.

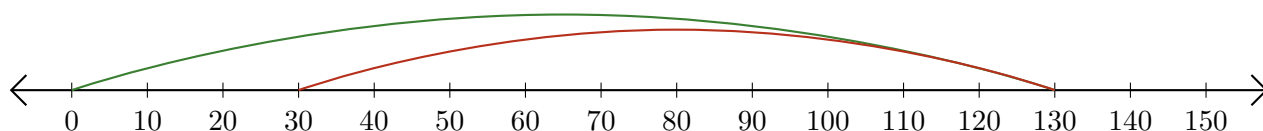
1. $130 - 90 = \underline{40}$



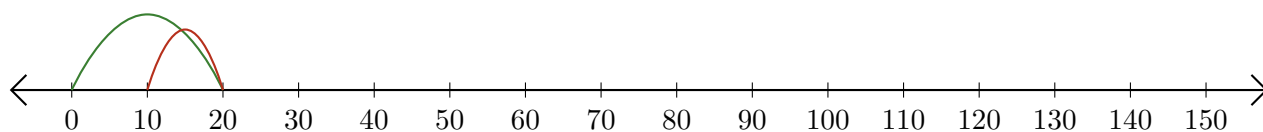
2. $150 - 140 = \underline{10}$



3. $130 - 100 = \underline{30}$



4. $20 - 10 = \underline{10}$



5. $120 - 80 = \underline{40}$

