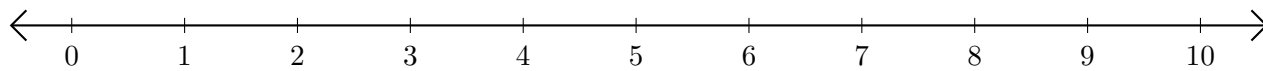


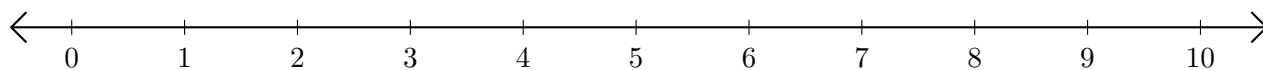
# Soustraction de Nombres - Droite Graduée (I)

Utilisez la droite graduée pour calculer chaque différence.

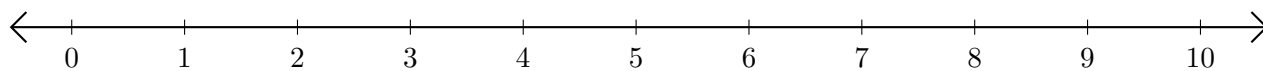
1.  $7 - 4 = \underline{\quad}$



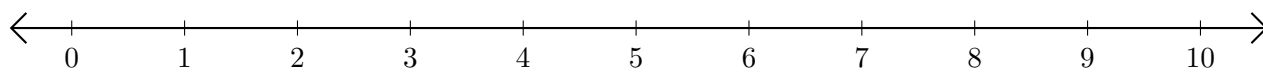
2.  $10 - 9 = \underline{\quad}$



3.  $10 - 6 = \underline{\quad}$



4.  $8 - 7 = \underline{\quad}$



5.  $8 - 3 = \underline{\quad}$

