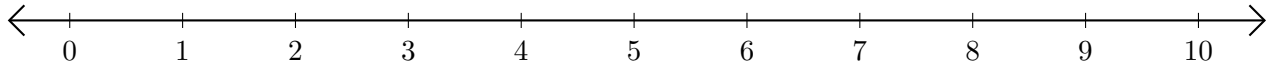


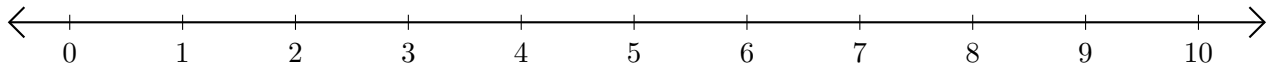
Soustraction de Nombres - Droite Graduée (G)

Utilisez la droite graduée pour calculer chaque différence.

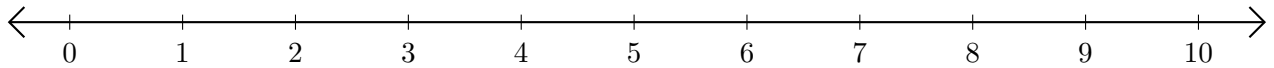
1. $8 - 5 = \underline{\quad}$



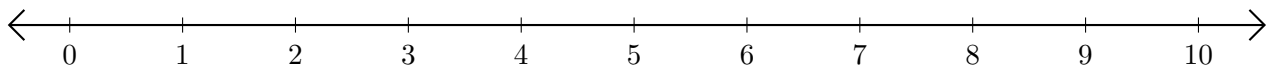
2. $10 - 2 = \underline{\quad}$



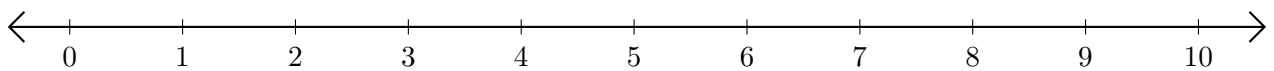
3. $7 - 3 = \underline{\quad}$



4. $10 - 9 = \underline{\quad}$



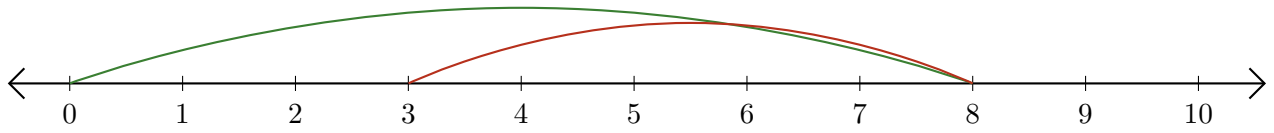
5. $8 - 4 = \underline{\quad}$



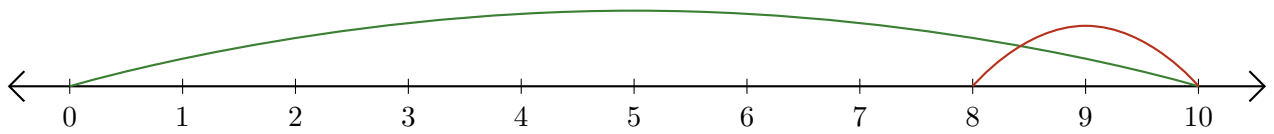
Soustraction de Nombres - Droite Graduée (G) Réponses

Utilisez la droite graduée pour calculer chaque différence.

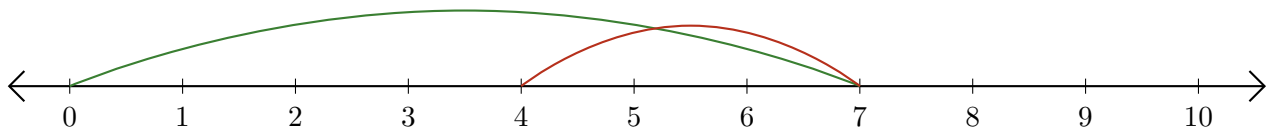
1. $8 - 5 = \underline{3}$



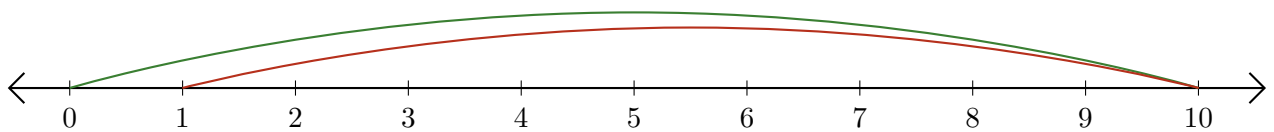
2. $10 - 2 = \underline{8}$



3. $7 - 3 = \underline{4}$



4. $10 - 9 = \underline{1}$



5. $8 - 4 = \underline{4}$

