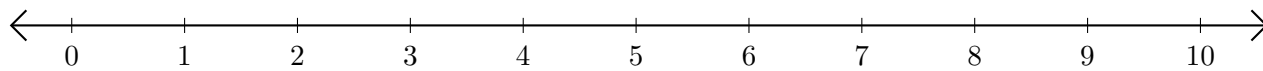


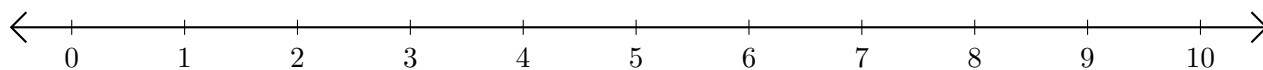
Soustraction de Nombres - Droite Graduée (A)

Utilisez la droite graduée pour calculer chaque différence.

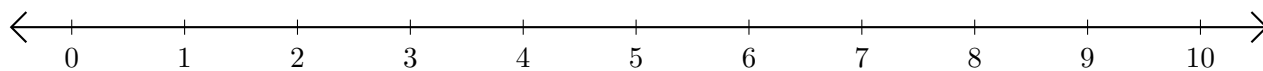
1. $7 - 5 = \underline{\quad}$



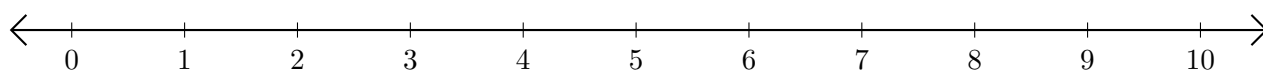
2. $10 - 8 = \underline{\quad}$



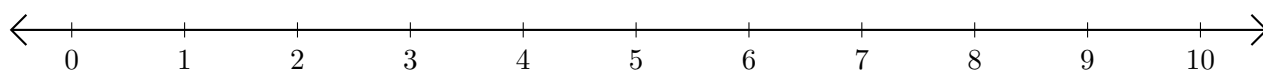
3. $10 - 9 = \underline{\quad}$



4. $9 - 4 = \underline{\quad}$



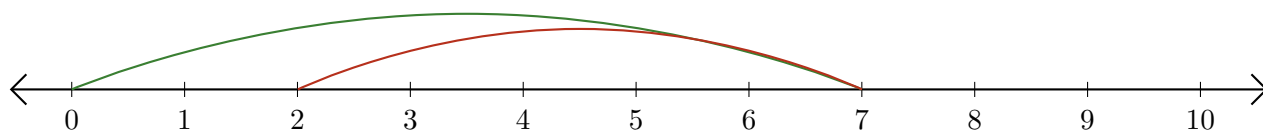
5. $10 - 1 = \underline{\quad}$



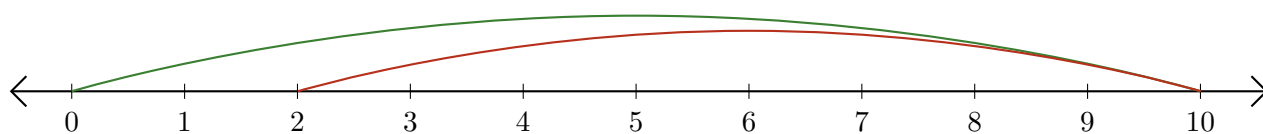
Soustraction de Nombres - Droite Graduée (A) Réponses

Utilisez la droite graduée pour calculer chaque différence.

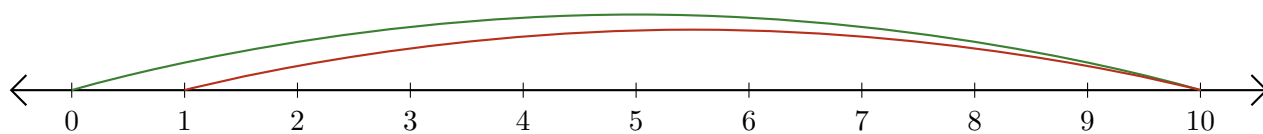
1. $7 - 5 = \underline{2}$



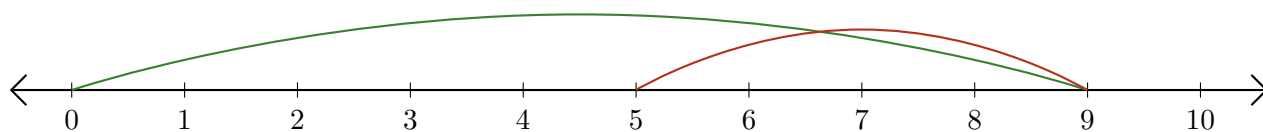
2. $10 - 8 = \underline{2}$



3. $10 - 9 = \underline{1}$



4. $9 - 4 = \underline{5}$



5. $10 - 1 = \underline{9}$

