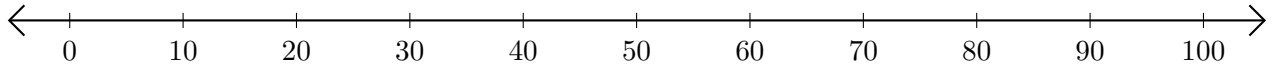


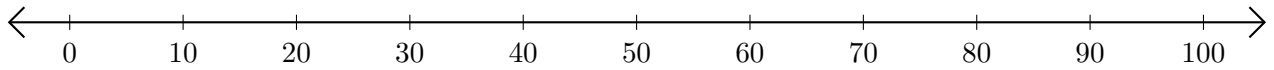
# Soustraction de Nombres - Droite Graduée (H)

Utilisez la droite graduée pour calculer chaque différence.

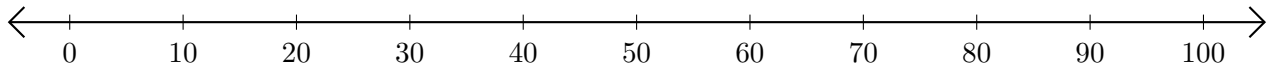
1.  $100 - 40 = \underline{\quad}$



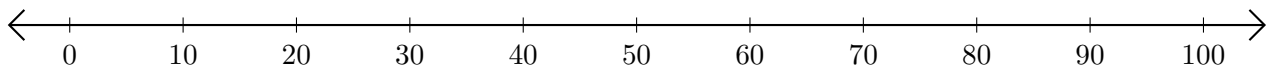
2.  $90 - 20 = \underline{\quad}$



3.  $100 - 90 = \underline{\quad}$



4.  $90 - 10 = \underline{\quad}$



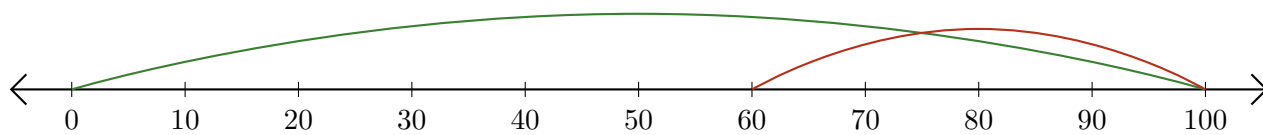
5.  $60 - 30 = \underline{\quad}$



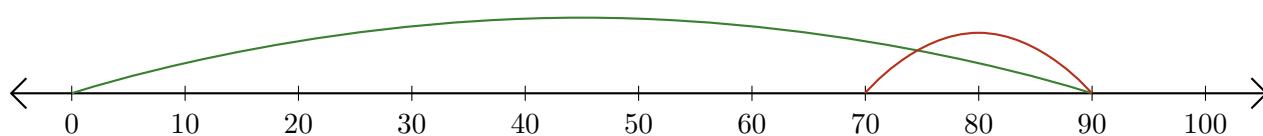
# Soustraction de Nombres - Droite Graduée (H) Réponses

Utilisez la droite graduée pour calculer chaque différence.

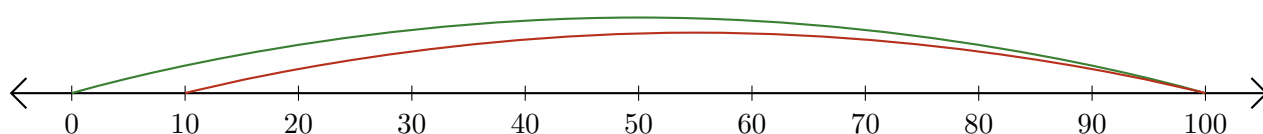
1.  $100 - 40 = \underline{60}$



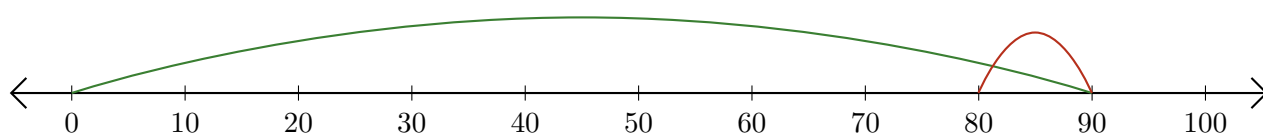
2.  $90 - 20 = \underline{70}$



3.  $100 - 90 = \underline{10}$



4.  $90 - 10 = \underline{80}$



5.  $60 - 30 = \underline{30}$

