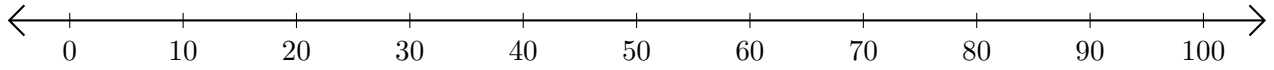


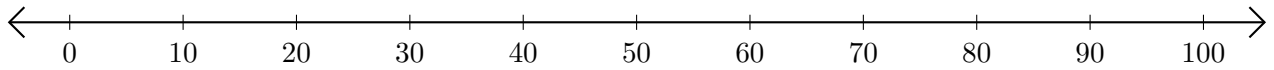
Soustraction de Nombres - Droite Graduée (F)

Utilisez la droite graduée pour calculer chaque différence.

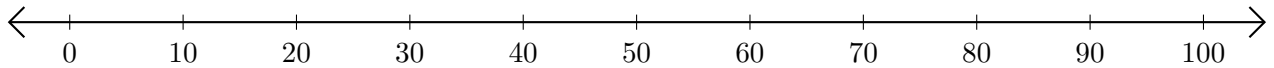
1. $30 - 10 = \underline{\quad}$



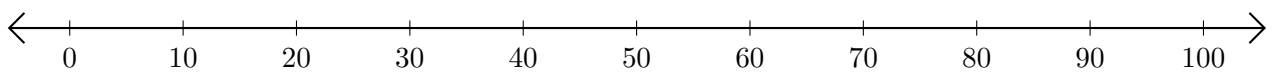
2. $80 - 40 = \underline{\quad}$



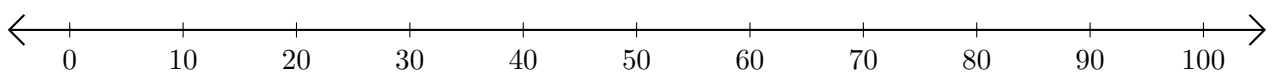
3. $40 - 20 = \underline{\quad}$



4. $90 - 80 = \underline{\quad}$



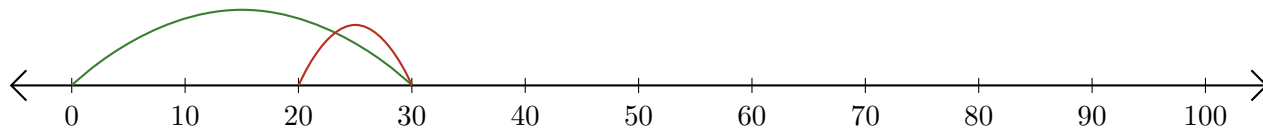
5. $50 - 30 = \underline{\quad}$



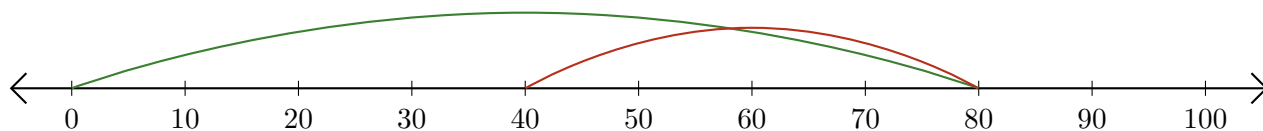
Soustraction de Nombres - Droite Graduée (F) Réponses

Utilisez la droite graduée pour calculer chaque différence.

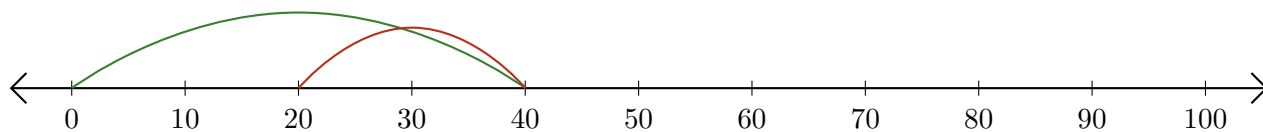
1. $30 - 10 = \underline{20}$



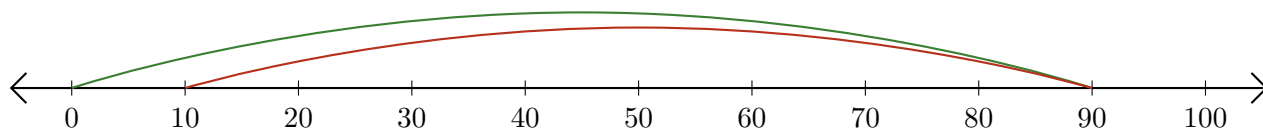
2. $80 - 40 = \underline{40}$



3. $40 - 20 = \underline{20}$



4. $90 - 80 = \underline{10}$



5. $50 - 30 = \underline{20}$

