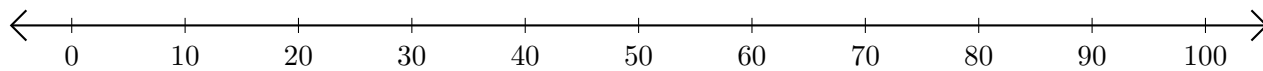


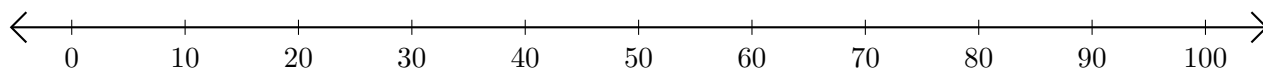
Soustraction de Nombres - Droite Graduée (E)

Utilisez la droite graduée pour calculer chaque différence.

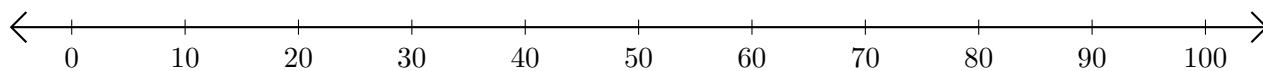
1. $60 - 20 = \underline{\quad}$



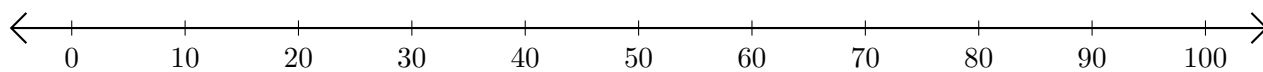
2. $80 - 70 = \underline{\quad}$



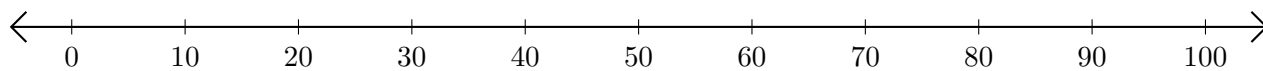
3. $100 - 50 = \underline{\quad}$



4. $80 - 60 = \underline{\quad}$



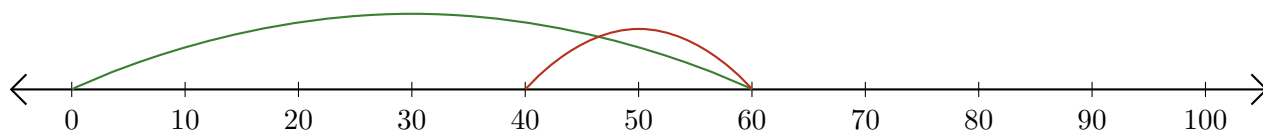
5. $50 - 40 = \underline{\quad}$



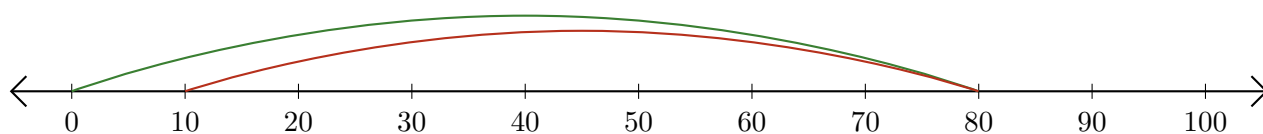
Soustraction de Nombres - Droite Graduée (E) Réponses

Utilisez la droite graduée pour calculer chaque différence.

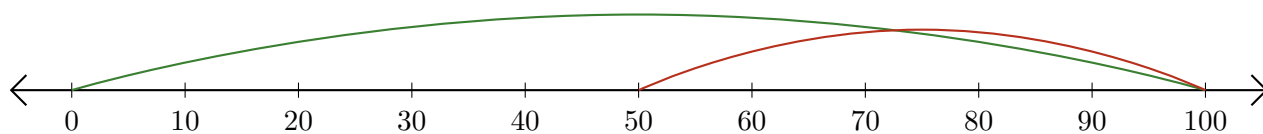
1. $60 - 20 = \underline{40}$



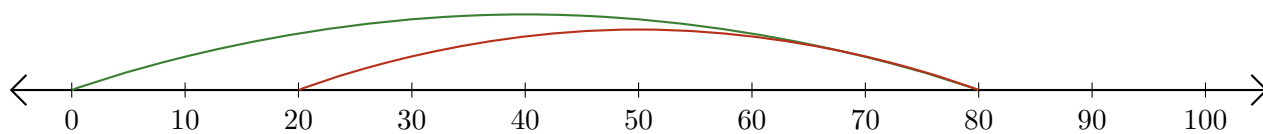
2. $80 - 70 = \underline{10}$



3. $100 - 50 = \underline{50}$



4. $80 - 60 = \underline{20}$



5. $50 - 40 = \underline{10}$

