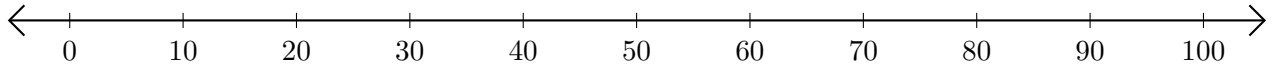


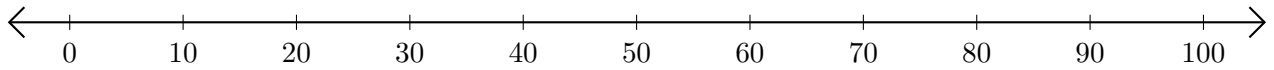
Soustraction de Nombres - Droite Graduée (A)

Utilisez la droite graduée pour calculer chaque différence.

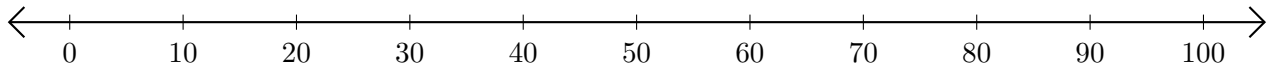
1. $100 - 50 = \underline{\quad}$



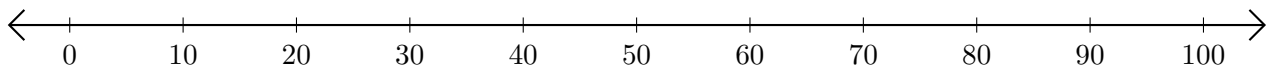
2. $70 - 20 = \underline{\quad}$



3. $60 - 30 = \underline{\quad}$



4. $80 - 40 = \underline{\quad}$



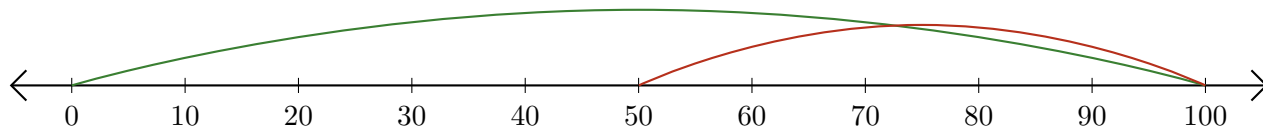
5. $80 - 60 = \underline{\quad}$



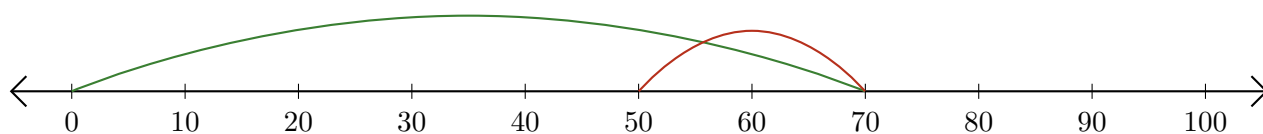
Soustraction de Nombres - Droite Graduée (A) Réponses

Utilisez la droite graduée pour calculer chaque différence.

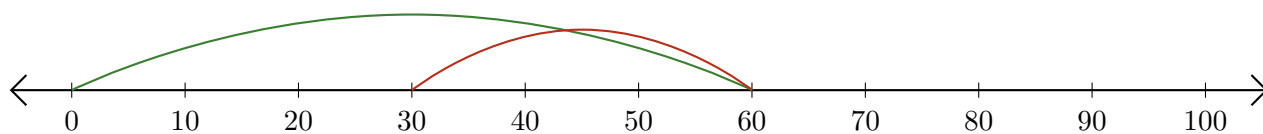
1. $100 - 50 = \underline{50}$



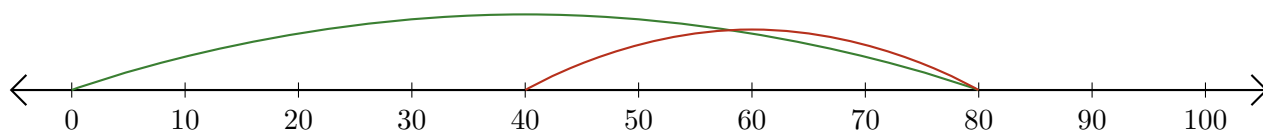
2. $70 - 20 = \underline{50}$



3. $60 - 30 = \underline{30}$



4. $80 - 40 = \underline{40}$



5. $80 - 60 = \underline{20}$

