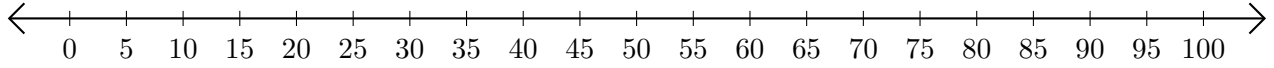


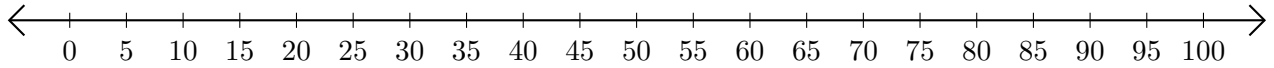
Soustraction de Nombres - Droite Graduée (D)

Utilisez la droite graduée pour calculer chaque différence.

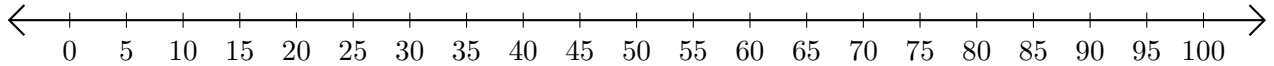
1. $60 - 30 = \underline{\quad}$



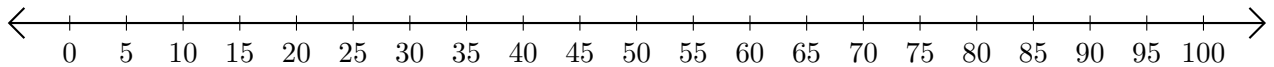
2. $35 - 10 = \underline{\quad}$



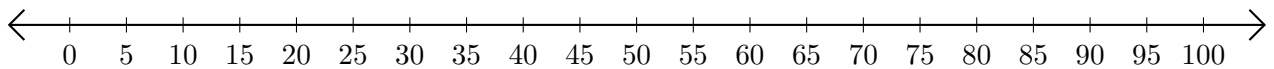
3. $100 - 90 = \underline{\quad}$



4. $100 - 60 = \underline{\quad}$



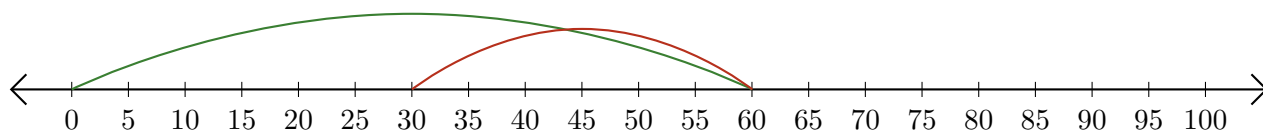
5. $75 - 50 = \underline{\quad}$



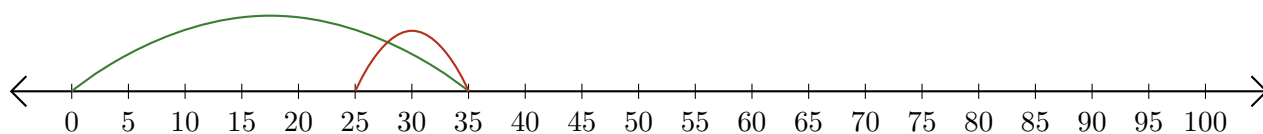
Soustraction de Nombres - Droite Graduée (D) Réponses

Utilisez la droite graduée pour calculer chaque différence.

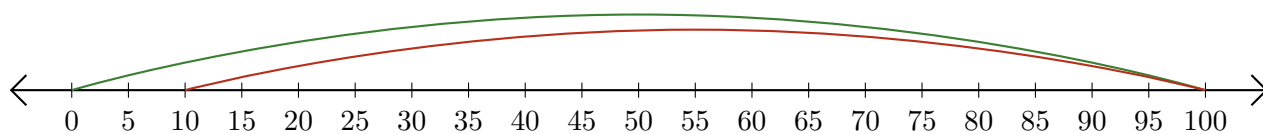
1. $60 - 30 = \underline{30}$



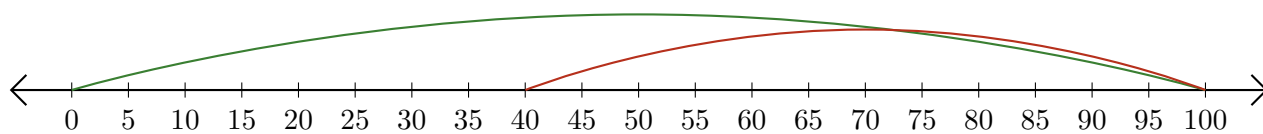
2. $35 - 10 = \underline{25}$



3. $100 - 90 = \underline{10}$



4. $100 - 60 = \underline{40}$



5. $75 - 50 = \underline{25}$

