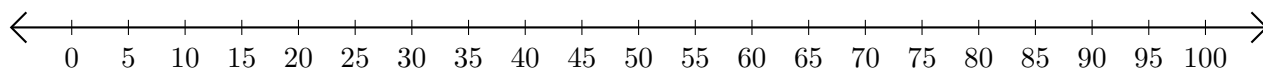


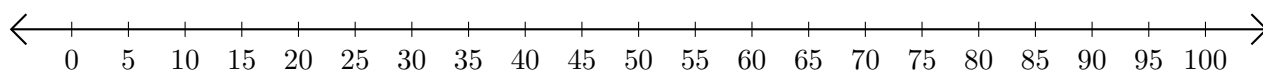
Soustraction de Nombres - Droite Graduée (C)

Utilisez la droite graduée pour calculer chaque différence.

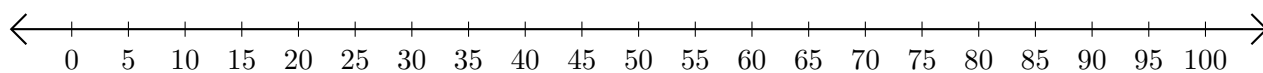
1. $55 - 25 = \underline{\quad}$



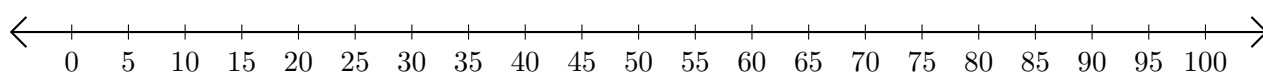
2. $100 - 90 = \underline{\quad}$



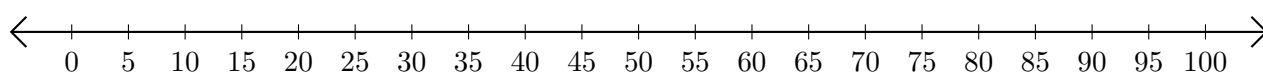
3. $80 - 20 = \underline{\quad}$



4. $45 - 30 = \underline{\quad}$



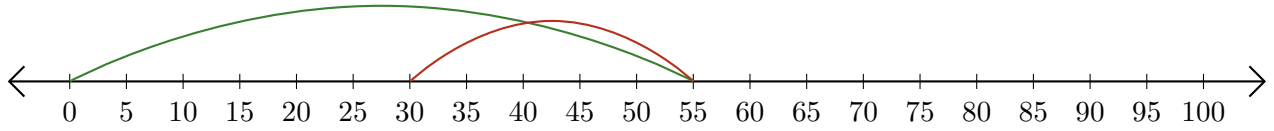
5. $80 - 75 = \underline{\quad}$



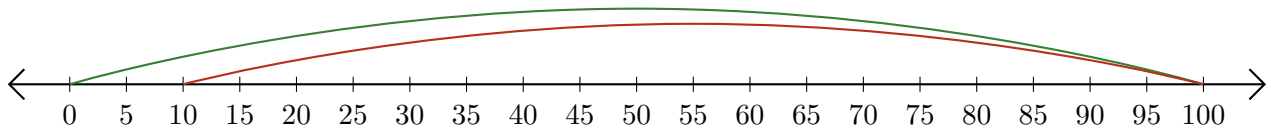
Soustraction de Nombres - Droite Graduée (C) Réponses

Utilisez la droite graduée pour calculer chaque différence.

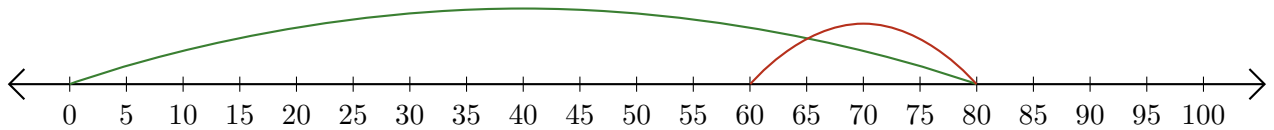
1. $55 - 25 = \underline{30}$



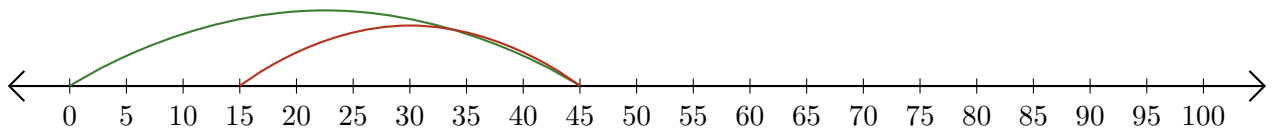
2. $100 - 90 = \underline{10}$



3. $80 - 20 = \underline{60}$



4. $45 - 30 = \underline{15}$



5. $80 - 75 = \underline{5}$

