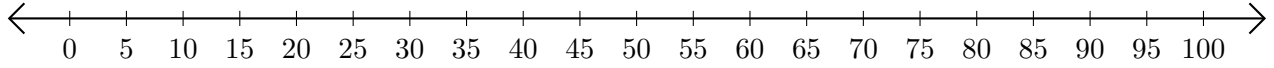


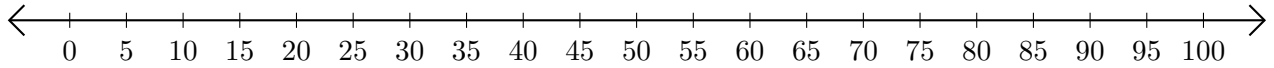
## Soustraction de Nombres - Droite Graduée (B)

Utilisez la droite graduée pour calculer chaque différence.

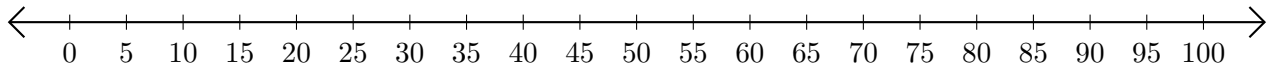
1.  $55 - 35 = \underline{\quad}$



2.  $30 - 10 = \underline{\quad}$



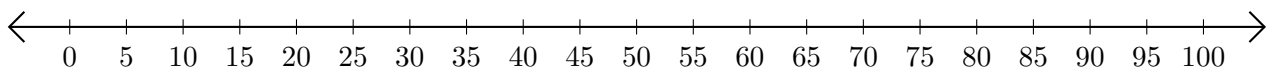
3.  $80 - 60 = \underline{\quad}$



4.  $80 - 75 = \underline{\quad}$



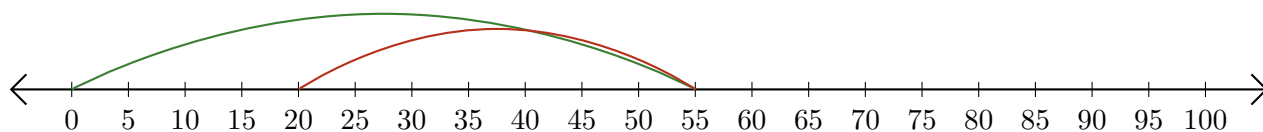
5.  $85 - 20 = \underline{\quad}$



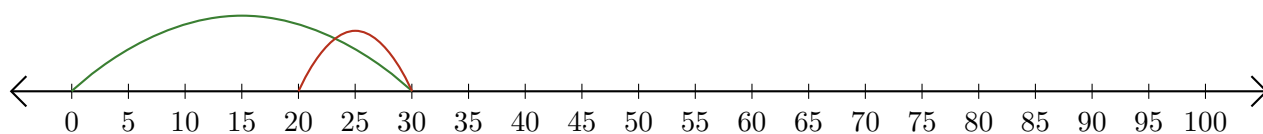
# Soustraction de Nombres - Droite Graduée (B) Réponses

Utilisez la droite graduée pour calculer chaque différence.

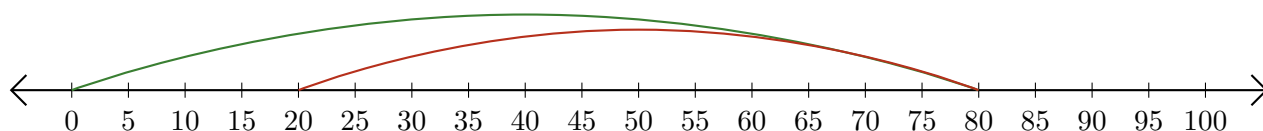
1.  $55 - 35 = \underline{20}$



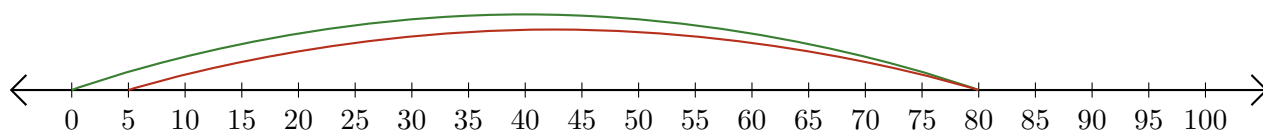
2.  $30 - 10 = \underline{20}$



3.  $80 - 60 = \underline{20}$



4.  $80 - 75 = \underline{5}$



5.  $85 - 20 = \underline{65}$

