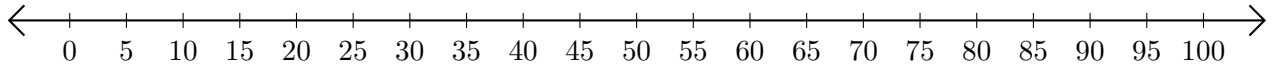


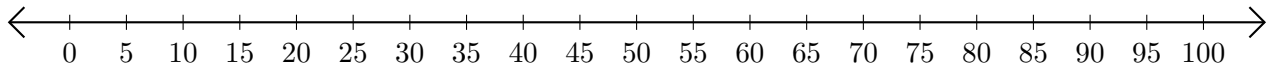
Soustraction de Nombres - Droite Graduée (A)

Utilisez la droite graduée pour calculer chaque différence.

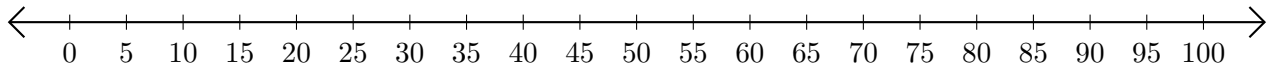
1. $95 - 20 = \underline{\quad}$



2. $95 - 90 = \underline{\quad}$



3. $100 - 45 = \underline{\quad}$



4. $80 - 55 = \underline{\quad}$



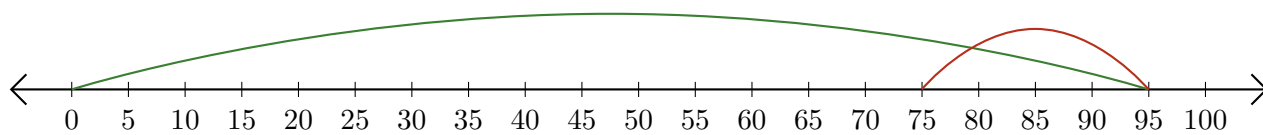
5. $95 - 75 = \underline{\quad}$



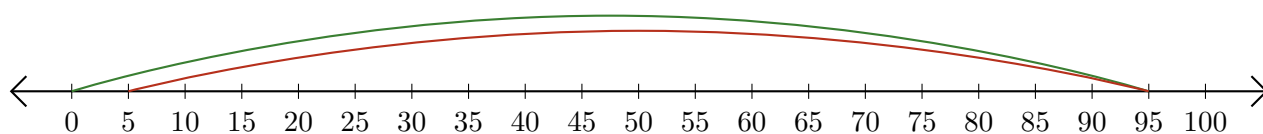
Soustraction de Nombres - Droite Graduée (A) Réponses

Utilisez la droite graduée pour calculer chaque différence.

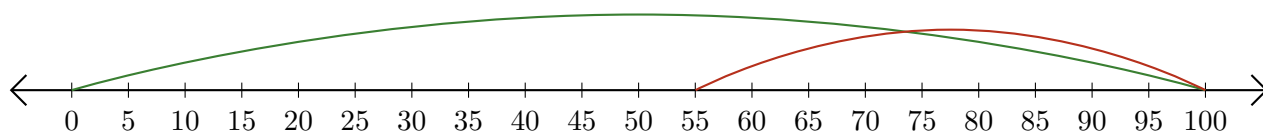
1. $95 - 20 = \underline{75}$



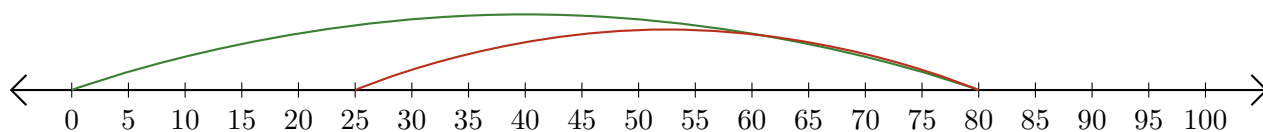
2. $95 - 90 = \underline{5}$



3. $100 - 45 = \underline{55}$



4. $80 - 55 = \underline{25}$



5. $95 - 75 = \underline{20}$

